

UNIVERSITY OF SWAZILAND



SUPPLEMENTARY EXAMINATION PAPER 2015

TITLE OF PAPER : PROBABILITY AND STATISTICS

COURSE CODE : EE 301

TIME ALLOWED : THREE (3) HOURS

INSTRUCTIONS : ANSWER ANY FIVE QUESTIONS.

**REQUIREMENTS : SCIENTIFIC CALCULATOR AND
STATISTICAL TABLES**

Question 1

- (a) There are 24 elephants in a game reserve. The warden tags six of the elephants with small radio transmitters and returns them to the reserve. The next month, he randomly selects five elephants from the reserve. He counts how many of these elephants are tagged. Assume that no elephants leave or enter the reserve, or die or give birth, between the tagging and the selection; and that all outcomes of the selection are equally likely. Find the probability that exactly two of the selected elephants are tagged, giving the answer correct to 3 decimal places.
(6 Marks)
- (b) A couple are planning to have a family. They decide to stop having children either when they have two boys or when they have four children. Suppose that they are successful in their plan.
- (i) Write down the sample space.
(4Marks)
- (ii) Assume that, each time that they have a child, the probability that it is a boy is $1/2$, independent of all other times. Find $P(E)$ and $P(F)$ where $E =$ "there are at least two girls", $F =$ "there are more girls than boys".
(10Marks)

Question 2

- (a) Suppose that X and Y are independent random variables with the same probability density function (pdf) $f(x)$. Write down, without proof, a formula for the pdf of $X + Y$.
(2 Marks)
- (b) Suppose that $f(x) = x/2$ for $0 < x < 2$ (and $f(x) = 0$ elsewhere).
- (i) Find the pdf of $W = X + Y$ for $0 < w < 2$ and for $2 < w < 4$.
(12 Marks)
- (ii) Find the pdf of $V = (X - 1)^2$.
(6 Marks)

Question 3

The random variable X has the binomial distribution with probability mass function

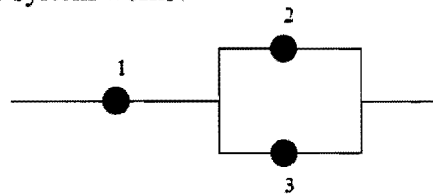
$$P(X = x) = \binom{2}{x} p^x (1-p)^{2-x}, \quad x = 0, 1, 2; \quad 0 < p < 1.$$

- (a)
- (i) Write down $E(X)$, $\text{Var}(X)$ and $P(X = 2)$ in terms of the parameter p .
(3 Marks)

- (ii) Also find $P(X = 0 | X < 2)$ and $P(X = 1 | X < 2)$, simplifying your answers as far as possible. (4 Marks)
- (b) Let $Y = X_1 + X_2 + \dots + X_{100}$ be the sum of 100 independent random variables, each distributed as X .
- (i) Explain why Y has the $B(200, p)$ distribution. (2 Marks)
- (ii) Use a suitable approximation to find $P(Y > 140)$ when $p = \frac{2}{3}$. (4 Marks)
- (iii) Use a suitable approximation to find $P(Y > 2)$ when $p = 0.02$. (3 Marks)
- (iv) Use a suitable approximation to find $P(Y \leq 197)$ when $p = 0.98$. (4 Marks)

Question 4

- (a) In a binary transmission channel, a 1 is transmitted with probability $\frac{2}{3}$ and a 0 with probability $\frac{1}{3}$. The conditional probability of receiving a 1 when a 1 was sent is 0.95; the conditional probability of receiving a 0 when a 0 was sent is 0.90. Given that a 1 is received, what is the probability that a 1 was transmitted? (10 Marks)
- (b) Consider the following system. Each component has a probability 0.1 of failing. What is the probability that the system works?



(10 Marks)

Question 5

- (c) A radioactive source of material emits a radioactive particle with probability $\frac{1}{100}$ in each second. Let X be the number of particles emitted in one hour.
- (i) What is the distribution of X and its parameter? (5 Marks)
- (ii) Sketch the pmf of X . (5 Marks)
- (d) An electrical component has a lifetime X that is exponentially distributed with parameter $\lambda = \frac{1}{10}$ per year. What is the probability the component is still alive after 5 years? (10 Marks)

Question 6

A random vector (X, Y) has joint pdf, given by

$$f(x, y) = 2e^{-x-2y}, \quad x > 0, y > 0$$

(a) Calculate $E[XY]$.

(6Marks)

(b) Calculate the covariance of $X + Y$ and $X - Y$.

(14 Marks)

Question 7

A company manufacturing light bulbs is testing a new model. The company is going to test the hypothesis that the mean life time is 1000 hours vs. the alternative hypothesis that it is less than 1000 hours at the significance level $\alpha = 0.02$. Assume that the population distribution for life time is approximately normal.

A sample of 16 light bulbs are found to have sample mean $\bar{x} = 987.5$ hours and sample variance $S^2 = 400$.

(a) State the critical region and answer whether the null hypothesis H_0 is rejected.

(12 Marks)

(b) Find a 90% confidence interval for the population variance σ^2 .

(8 Marks)

Normal Distribution

Table C-1. Cumulative Probabilities of the Standard Normal Distribution.

Entry is area A under the standard normal curve from $-\infty$ to $z(A)$

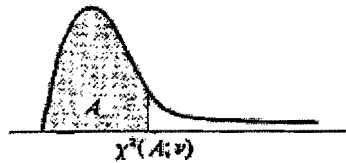


z	.00	.01	.02	.03	.04	.05	.06	.07	.08	.09
.0	.5000	.5040	.5080	.5120	.5160	.5199	.5239	.5279	.5319	.5359
.1	.5398	.5438	.5478	.5517	.5557	.5596	.5636	.5675	.5714	.5753
.2	.5793	.5832	.5871	.5910	.5948	.5987	.6026	.6064	.6103	.6141
.3	.6179	.6217	.6255	.6293	.6331	.6368	.6406	.6443	.6480	.6517
.4	.6554	.6591	.6628	.6664	.6700	.6736	.6772	.6808	.6844	.6879
.5	.6915	.6950	.6985	.7019	.7054	.7088	.7123	.7157	.7190	.7224
.6	.7257	.7291	.7324	.7357	.7389	.7422	.7454	.7486	.7517	.7549
.7	.7580	.7611	.7642	.7673	.7704	.7734	.7764	.7794	.7823	.7852
.8	.7881	.7910	.7939	.7967	.7995	.8023	.8051	.8078	.8106	.8133
.9	.8159	.8186	.8212	.8238	.8264	.8289	.8315	.8340	.8365	.8389
1.0	.8413	.8438	.8461	.8485	.8508	.8531	.8554	.8577	.8599	.8621
1.1	.8643	.8665	.8686	.8708	.8729	.8749	.8770	.8790	.8810	.8830
1.2	.8849	.8869	.8888	.8907	.8925	.8944	.8962	.8980	.8997	.9015
1.3	.9032	.9049	.9066	.9082	.9099	.9115	.9131	.9147	.9162	.9177
1.4	.9192	.9207	.9222	.9236	.9251	.9265	.9279	.9292	.9306	.9319
1.5	.9332	.9345	.9357	.9370	.9382	.9394	.9406	.9418	.9429	.9441
1.6	.9452	.9463	.9474	.9484	.9495	.9505	.9515	.9525	.9535	.9545
1.7	.9554	.9564	.9573	.9582	.9591	.9599	.9608	.9616	.9625	.9633
1.8	.9641	.9649	.9656	.9664	.9671	.9678	.9686	.9693	.9699	.9706
1.9	.9713	.9719	.9726	.9732	.9738	.9744	.9750	.9756	.9761	.9767
2.0	.9772	.9778	.9783	.9788	.9793	.9798	.9803	.9808	.9812	.9817
2.1	.9821	.9826	.9830	.9834	.9838	.9842	.9846	.9850	.9854	.9857
2.2	.9861	.9864	.9868	.9871	.9875	.9878	.9881	.9884	.9887	.9890
2.3	.9893	.9896	.9898	.9901	.9904	.9906	.9909	.9911	.9913	.9916
2.4	.9918	.9920	.9922	.9925	.9927	.9929	.9931	.9932	.9934	.9936
2.5	.9938	.9940	.9941	.9943	.9945	.9946	.9948	.9949	.9951	.9952
2.6	.9953	.9955	.9956	.9957	.9959	.9960	.9961	.9962	.9963	.9964
2.7	.9965	.9966	.9967	.9968	.9969	.9970	.9971	.9972	.9973	.9974
2.8	.9974	.9975	.9976	.9977	.9977	.9978	.9979	.9979	.9980	.9981
2.9	.9981	.9982	.9982	.9983	.9984	.9984	.9985	.9985	.9986	.9986
3.0	.9987	.9987	.9987	.9988	.9988	.9989	.9989	.9989	.9990	.9990
3.1	.9990	.9991	.9991	.9991	.9992	.9992	.9992	.9992	.9993	.9993
3.2	.9993	.9993	.9994	.9994	.9994	.9994	.9994	.9995	.9995	.9995
3.3	.9995	.9995	.9995	.9996	.9996	.9996	.9996	.9996	.9996	.9997
3.4	.9997	.9997	.9997	.9997	.9997	.9997	.9997	.9997	.9997	.9998

Chi-Square Distribution

Table C-2. Percentiles of the χ^2 Distribution

Entry is $\chi^2(A; \nu)$ where $P\{\chi^2(\nu) \leq \chi^2(A; \nu)\} = A$

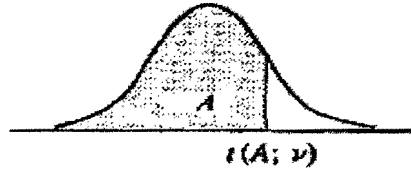


ν	A									
	.005	.010	.025	.050	.100	.900	.950	.975	.990	.995
1	0.00393	0.0157	0.0482	0.1013	0.2158	2.71	3.84	5.02	6.63	7.88
2	0.0100	0.0201	0.0506	0.103	0.211	4.61	5.99	7.38	9.21	10.60
3	0.072	0.115	0.216	0.352	0.584	6.25	7.81	9.35	11.34	12.84
4	0.207	0.297	0.484	0.711	1.064	7.78	9.49	11.14	13.28	14.86
5	0.412	0.554	0.831	1.145	1.61	9.24	11.07	12.83	15.09	16.75
6	0.676	0.872	1.24	1.64	2.20	10.64	12.59	14.45	16.81	18.55
7	0.989	1.24	1.69	2.17	2.83	12.02	14.07	16.01	18.48	20.28
8	1.34	1.65	2.18	2.73	3.49	13.36	15.51	17.53	20.09	21.96
9	1.73	2.09	2.70	3.33	4.17	14.68	16.92	19.02	21.67	23.59
10	2.16	2.56	3.25	3.94	4.87	15.99	18.31	20.48	23.21	25.19
11	2.60	3.05	3.82	4.57	5.58	17.28	19.68	21.92	24.73	26.76
12	3.07	3.57	4.40	5.23	6.30	18.55	21.03	23.34	26.22	28.30
13	3.57	4.11	5.01	5.89	7.04	19.81	22.36	24.74	27.69	29.82
14	4.07	4.66	5.63	6.57	7.79	21.06	23.68	26.12	29.14	31.32
15	4.60	5.23	6.26	7.26	8.55	22.31	25.00	27.49	30.58	32.80
16	5.14	5.81	6.91	7.96	9.31	23.54	26.30	28.85	32.00	34.27
17	5.70	6.41	7.56	8.67	10.09	24.77	27.59	30.19	33.41	35.72
18	6.26	7.01	8.23	9.39	10.86	25.99	28.87	31.53	34.81	37.16
19	6.84	7.63	8.91	10.12	11.65	27.20	30.14	32.85	36.19	38.58
20	7.43	8.26	9.59	10.85	12.44	28.41	31.41	34.17	37.57	40.00
21	8.03	8.90	10.28	11.59	13.24	29.62	32.67	35.48	38.93	41.40
22	8.64	9.54	10.98	12.34	14.04	30.81	33.92	36.78	40.29	42.80
23	9.26	10.20	11.69	13.09	14.85	32.01	35.17	38.08	41.64	44.18
24	9.89	10.86	12.40	13.85	15.66	33.20	36.42	39.36	42.98	45.56
25	10.52	11.52	13.12	14.61	16.47	34.38	37.65	40.65	44.31	46.93
26	11.16	12.20	13.84	15.38	17.29	35.56	38.89	41.92	45.64	48.29
27	11.81	12.88	14.57	16.15	18.11	36.74	40.11	43.19	46.96	49.64
28	12.46	13.56	15.31	16.93	18.94	37.92	41.34	44.46	48.28	50.99
29	13.12	14.26	16.05	17.71	19.77	39.09	42.56	45.72	49.59	52.34
30	13.79	14.95	16.79	18.49	20.60	40.26	43.77	46.98	50.89	53.67
40	20.71	22.16	24.43	26.51	29.05	51.81	55.76	59.34	63.69	66.77
50	27.99	29.71	32.36	34.76	37.69	63.17	67.50	71.42	76.15	79.49
60	35.53	37.48	40.48	43.19	46.46	74.40	79.08	83.30	88.38	91.95
70	43.28	45.44	48.76	51.74	55.33	85.53	90.53	95.02	100.4	104.2
80	51.17	53.54	57.15	60.39	64.28	96.58	101.9	106.6	112.3	116.3
90	59.20	61.75	65.65	69.13	73.29	107.6	113.1	118.1	124.1	128.3
100	67.33	70.06	74.22	77.93	82.36	118.5	124.3	129.6	135.8	140.2

Student's Distribution (*t* Distribution)

Table C-4 Percentiles of the *t* Distribution

Entry is $t(A; \nu)$ where $P\{t(\nu) \leq t(A; \nu)\} = A$



ν	A						
	.60	.70	.80	.85	.90	.95	.975
1	0.325	0.727	1.376	1.963	3.078	6.314	12.706
2	0.289	0.617	1.061	1.386	1.886	2.920	4.303
3	0.277	0.584	0.978	1.250	1.638	2.353	3.182
4	0.271	0.569	0.941	1.190	1.533	2.132	2.776
5	0.267	0.559	0.920	1.156	1.476	2.015	2.571
6	0.265	0.553	0.906	1.134	1.440	1.943	2.447
7	0.263	0.549	0.896	1.119	1.415	1.895	2.365
8	0.262	0.546	0.889	1.108	1.397	1.860	2.306
9	0.261	0.543	0.883	1.100	1.383	1.833	2.262
10	0.260	0.542	0.879	1.093	1.372	1.812	2.228
11	0.260	0.540	0.876	1.088	1.363	1.796	2.201
12	0.259	0.539	0.873	1.083	1.356	1.782	2.179
13	0.259	0.537	0.870	1.079	1.350	1.771	2.160
14	0.258	0.537	0.868	1.076	1.345	1.761	2.145
15	0.258	0.536	0.866	1.074	1.341	1.753	2.131
16	0.258	0.535	0.865	1.071	1.337	1.746	2.120
17	0.257	0.534	0.863	1.069	1.333	1.740	2.110
18	0.257	0.534	0.862	1.067	1.330	1.734	2.101
19	0.257	0.533	0.861	1.066	1.328	1.729	2.093
20	0.257	0.533	0.860	1.064	1.325	1.725	2.086
21	0.257	0.532	0.859	1.063	1.323	1.721	2.080
22	0.256	0.532	0.858	1.061	1.321	1.717	2.074
23	0.256	0.532	0.858	1.060	1.319	1.714	2.069
24	0.256	0.531	0.857	1.059	1.318	1.711	2.064
25	0.256	0.531	0.856	1.058	1.316	1.708	2.060
26	0.256	0.531	0.856	1.058	1.315	1.706	2.056
27	0.256	0.531	0.855	1.057	1.314	1.703	2.052
28	0.256	0.530	0.855	1.056	1.313	1.701	2.048
29	0.256	0.530	0.854	1.055	1.311	1.699	2.045
30	0.256	0.530	0.854	1.055	1.310	1.697	2.042
40	0.255	0.529	0.851	1.050	1.303	1.684	2.021
60	0.254	0.527	0.848	1.045	1.296	1.671	2.000
120	0.254	0.526	0.845	1.041	1.289	1.658	1.980
∞	0.253	0.524	0.842	1.036	1.282	1.645	1.960

Table C-4 (Continued) Percentiles of the t Distribution

v	A						
	.98	.985	.99	.9925	.995	.9975	.9995
1	15.895	21.205	31.821	42.434	63.657	127.322	636.590
2	4.849	5.643	6.965	8.073	9.925	14.089	31.598
3	3.482	3.896	4.541	5.047	5.841	7.453	12.924
4	2.999	3.298	3.747	4.088	4.604	5.598	8.610
5	2.757	3.003	3.365	3.634	4.032	4.773	6.869
6	2.612	2.829	3.143	3.372	3.707	4.317	5.959
7	2.517	2.715	2.998	3.203	3.499	4.029	5.408
8	2.449	2.634	2.896	3.085	3.355	3.833	5.041
9	2.398	2.574	2.821	2.998	3.250	3.690	4.781
10	2.359	2.527	2.764	2.932	3.169	3.581	4.587
11	2.328	2.491	2.718	2.879	3.106	3.497	4.437
12	2.303	2.461	2.681	2.836	3.055	3.428	4.318
13	2.282	2.436	2.650	2.801	3.012	3.372	4.221
14	2.264	2.415	2.624	2.771	2.977	3.326	4.140
15	2.249	2.397	2.602	2.746	2.947	3.286	4.073
16	2.235	2.382	2.583	2.724	2.921	3.252	4.015
17	2.224	2.368	2.567	2.706	2.898	3.222	3.965
18	2.214	2.356	2.552	2.689	2.878	3.197	3.922
19	2.205	2.346	2.539	2.674	2.861	3.174	3.883
20	2.197	2.336	2.528	2.661	2.845	3.153	3.849
21	2.189	2.328	2.518	2.649	2.831	3.135	3.819
22	2.183	2.320	2.508	2.639	2.819	3.119	3.792
23	2.177	2.313	2.500	2.629	2.807	3.104	3.768
24	2.172	2.307	2.492	2.620	2.797	3.091	3.745
25	2.167	2.301	2.485	2.612	2.787	3.078	3.725
26	2.162	2.296	2.479	2.605	2.779	3.067	3.707
27	2.158	2.291	2.473	2.598	2.771	3.057	3.690
28	2.154	2.286	2.467	2.592	2.763	3.047	3.674
29	2.150	2.282	2.462	2.586	2.756	3.038	3.659
30	2.147	2.278	2.457	2.581	2.750	3.030	3.646
40	2.123	2.250	2.423	2.542	2.704	2.971	3.551
60	2.099	2.223	2.390	2.504	2.660	2.915	3.460
120	2.076	2.196	2.358	2.468	2.617	2.860	3.373
∞	2.054	2.170	2.326	2.432	2.576	2.807	3.291