

UNIVERSITY OF SWAZILAND

MAIN EXAMINATION PAPER 2008

TITLE OF PAPER : TOPICS IN STATISTICS (CATEGORICAL DATA ANALYSIS)

COURSE CODE : ST 405

TIME ALLOWED : THREE (3) HOURS

REQUIREMENTS : CALCULATOR AND STATISTICAL TABLES

**INSTRUCTIONS : ANSWER ANY FOUR QUESTIONS
(ALL QUESTION CARRY EQUAL MARKS)**

Question 1

A construction company makes concrete beams from cement mixed with gravel. The company wishes to compare the relative strengths of the concrete made from the different types of cement available. There are four different types of cement and three types of gravel. From each of the 12 different combinations of cement and gravel, equal test beams were made and tested for all combinations. The following table gives the number of destroyed beam per combination.

		Cement type			
		<i>A</i>	<i>B</i>	<i>C</i>	<i>D</i>
Gravel type	<i>1</i>	10	12	16	8
	<i>2</i>	14	15	18	10
	<i>3</i>	18	22	26	20

Carry out a suitable analysis of these data and write a report for the manager of the construction company who is not trained in statistics.

(20 Marks)

Question 2

In a psychological experiment to investigate the effects of stress on the ability to perform simple tasks, 90 volunteers were asked to perform a simple puzzle assembly task under normal conditions and under conditions of stress. Each subject was given three minutes to complete the task and on each occasion it was recorded whether or not they were successful. The order of the conditions under which each subject performed the task was determined at random. The results of the experiment are given in the following table.

		Normal conditions	
		<i>Successful</i>	<i>Unsuccessful</i>
Under stress	<i>Successful</i>	52	9
	<i>Unsuccessful</i>	20	9

a) Apply McNemar's test to the above results.

(8 Marks)

b) Use the conventional 2×2 chi-squared test on the above results, without using Yates' correction. How does any difference in the outcome of the two tests (a) and (b) arise?

(12 Marks)

Question 3

In a trial of anti-inflammatory drugs in the treatment of eczema, each member of a sample of 500 adults suffering from eczema was allocated at random to receive one of two treatments. After one month, the patients were asked to state whether their eczema improved. They replied as follows.

	<i>Improved</i>	<i>Not Improved</i>
<i>Treatment A</i>	205	45
<i>Treatment B</i>	180	70

Test the statistical significance of the saturated log-linear model for the data given in the above table.

(20 Marks)

Question 4

A marketing research firm was engaged by an automobile manufacturer to conduct a pilot study to examine the feasibility of fitting a model for ascertaining the likelihood that a family will purchase a new car during the next year. A random sample of 33 suburban families was selected. Data on annual family income and the current age of the oldest family automobile were obtained. A follow-up interview conducted 12 months later was used to determine whether the family actually purchased a new car or did not purchase a new car. The model below was fitted;

```
> data <- read.table("car_table.txt", header=T)
> attach(data)
> glm1 <- glm(purchase~income+age, family="binomial")
> summary(glm1)
```

Call:

```
glm(formula = purchase ~ income + age, family = "binomial")
```

Deviance Residuals:

```
      Min       1Q   Median       3Q      Max
-1.6189  -0.8949  -0.5880   0.9653   2.0846
```

Coefficients:

```
              Estimate Std. Error z value Pr(>|z|)
(Intercept) -4.73931     2.10195  -2.255  0.0242 *
income       0.06773     0.02806   2.414  0.0158 *
age          0.59863     0.39007   1.535  0.1249
```

- a) State the response function. (3 Marks)
- b) Using the model output above (coefficients) advise appropriately. (10 marks)
- c) What is the estimated probability that a family with annual income of E50,000 and an oldest car of 3 years will purchase a new car next year? (3 marks)
- d) Using the output below, state whether the two-factor interaction effect between annual family income and age of oldest automobile should be added to the regression model containing family income and age of oldest automobile as first-order terms; use $\alpha = 0.05$. What is the approximate p-value? (4 marks)

```
> glm3<-update(glm1, .~.+age:income)
> summary(glm3)
```

Call:

```
glm(formula = purchase ~ income + age + income:age, family = "binomial")
```

Deviance Residuals:

Min	1Q	Median	3Q	Max
-1.6096	-0.8222	-0.5334	0.8731	1.9924

Coefficients:

	Estimate	Std. Error	z value	Pr(> z)
(Intercept)	-2.372993	2.862477	-0.829	0.407
income	0.001326	0.064770	0.020	0.984
age	-0.303860	0.890512	-0.341	0.733
income:age	0.028860	0.026493	1.089	0.276

Question 5

A cohort of subjects, some non-smokers and others smokers, was observed for several years. The number of cases of cancer of the lung diagnosed among the different categories was recorded. Data regarding the number of years of smoking were also obtained from each individual. For each category the person-years of observation were calculated. The investigators wish to address the question of the relative risks of smoking. In the observed data the average number of cigarettes smoked per day represents the daily dose, and the years of smoking together with the average number of cigarettes smoked daily represents the total dose inhaled over time. The results of the analysis are given below;

Response variate: CASES
 Distribution: Poisson
 Link function: Log
 Fitted terms: Constant, PERSONYR, CIGS_DAY, SMOKING_

*** Summary of analysis ***

	d.f.	deviance	mean deviance	deviance ratio
Regression	3	63.168816931	21.056272310	21.06
Residual	31	74.122027311	2.391033139	
Total	34	137.290844242	4.037966007	

Change -3 -63.168816931 21.056272310 21.06
 * MESSAGE: ratios are based on dispersion parameter with value 1

*** Estimates of regression coefficients ***

	estimate	s.e.	t(*)
Constant	-4.669	0.988	-4.72
PERSONYR	0.000410	0.000104	3.94
CIGS_DAY	0.0559	0.0100	5.58
SMOKING_	0.0888	0.0166	5.34

• MESSAGE: s.e.s are based on dispersion parameter with value 1

Justify the method of analysis, state the model, interpret all relevant estimates and write a short report.

(20 Marks)

Question 6

```
> fit1=glm(Freq ~ sex*agegrp+polviews*sex+polviews*agegrp,  
+         family=poisson, data=DF)  
> anova(fit1,test='Chisq')
```

Analysis of Deviance Table

Model: poisson, link: log

Response: Freq

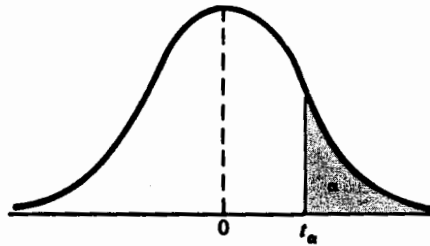
Terms added sequentially (first to last)

	Df	Deviance	Resid.	Df	Resid. Dev	P(> Chi)
NULL				55	566.00	
sex	1	2.44		54	563.56	0.12
agegrp	3	0.05		51	563.52	1.00
polviews	6	465.25		45	98.27	2.558e-97
sex:agegrp	3	10.81		42	87.45	0.01
sex:polviews	6	3.66		36	83.79	0.72
agegrp:polviews	18	62.18		18	21.61	9.045e-07

State model and justify the method used in the above analysis. Also comment on each of the variables in the model.

(20 marks)

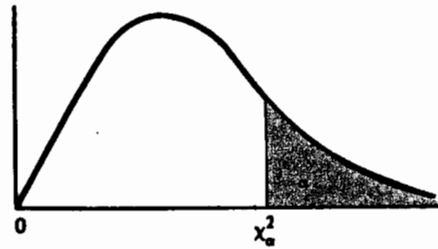
TABLE A.5*
Critical Values of the t Distribution



ν	α				
	0.10	0.05	0.025	0.01	0.005
1	3.078	6.314	12.706	31.821	63.657
2	1.886	2.920	4.303	6.965	9.925
3	1.638	2.353	3.182	4.541	5.841
4	1.533	2.132	2.776	3.747	4.604
5	1.476	2.015	2.571	3.365	4.032
6	1.440	1.943	2.447	3.143	3.707
7	1.415	1.895	2.365	2.998	3.499
8	1.397	1.860	2.306	2.896	3.355
9	1.383	1.833	2.262	2.821	3.250
10	1.372	1.812	2.228	2.764	3.169
11	1.363	1.796	2.201	2.718	3.106
12	1.356	1.782	2.179	2.681	3.055
13	1.350	1.771	2.160	2.650	3.012
14	1.345	1.761	2.145	2.624	2.977
15	1.341	1.753	2.131	2.602	2.947
16	1.337	1.746	2.120	2.583	2.921
17	1.333	1.740	2.110	2.567	2.898
18	1.330	1.734	2.101	2.552	2.878
19	1.328	1.729	2.093	2.539	2.861
20	1.325	1.725	2.086	2.528	2.845
21	1.323	1.721	2.080	2.518	2.831
22	1.321	1.717	2.074	2.508	2.819
23	1.319	1.714	2.069	2.500	2.807
24	1.318	1.711	2.064	2.492	2.797
25	1.316	1.708	2.060	2.485	2.787
26	1.315	1.706	2.056	2.479	2.779
27	1.314	1.703	2.052	2.473	2.771
28	1.313	1.701	2.048	2.467	2.763
29	1.311	1.699	2.045	2.462	2.756
inf.	1.282	1.645	1.960	2.326	2.576

*Table A.5 is taken from Table IV of R. A. Fisher, *Statistical Methods for Research Workers*, Oliver & Boyd Ltd., Edinburgh, by permission of the author and publishers.

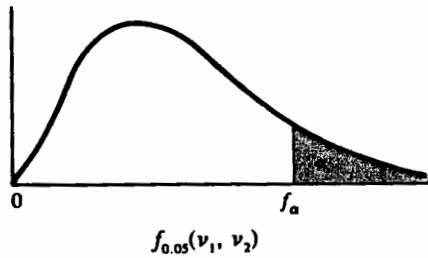
TABLE A.6*
Critical Values of the Chi-Square Distribution



ν	α							
	0.995	0.99	0.975	0.95	0.05	0.025	0.01	0.005
1	0.0 ³ 393	0.0 ³ 157	0.0 ³ 982	0.0 ² 393	3.841	5.024	6.635	7.879
2	0.0100	0.0201	0.0506	0.103	5.991	7.378	9.210	10.597
3	0.0717	0.115	0.216	0.352	7.815	9.348	11.345	12.838
4	0.207	0.297	0.484	0.711	9.488	11.143	13.277	14.860
5	0.412	0.554	0.831	1.145	11.070	12.832	15.086	16.750
6	0.676	0.872	1.237	1.635	12.592	14.449	16.812	18.548
7	0.989	1.239	1.690	2.167	14.067	16.013	18.475	20.278
8	1.344	1.646	2.180	2.733	15.507	17.535	20.090	21.955
9	1.735	2.088	2.700	3.325	16.919	19.023	21.666	23.589
10	2.156	2.558	3.247	3.940	18.307	20.483	23.209	25.188
11	2.603	3.053	3.816	4.575	19.675	21.920	24.725	26.757
12	3.074	3.571	4.404	5.226	21.026	23.337	26.217	28.300
13	3.565	4.107	5.009	5.892	22.362	24.736	27.688	29.819
14	4.075	4.660	5.629	6.571	23.685	26.119	29.141	31.319
15	4.601	5.229	6.262	7.261	24.996	27.488	30.578	32.801
16	5.142	5.812	6.908	7.962	26.296	28.845	32.000	34.267
17	5.697	6.408	7.564	8.672	27.587	30.191	33.409	35.718
18	6.265	7.015	8.231	9.390	28.869	31.526	34.805	37.156
19	6.844	7.633	8.907	10.117	30.144	32.852	36.191	38.582
20	7.434	8.260	9.591	10.851	31.410	34.170	37.566	39.997
21	8.034	8.897	10.283	11.591	32.671	35.479	38.932	41.401
22	8.643	9.542	10.982	12.338	33.924	36.781	40.289	42.796
23	9.260	10.196	11.689	13.091	35.172	38.076	41.638	44.181
24	9.886	10.856	12.401	13.848	36.415	39.364	42.980	45.558
25	10.520	11.524	13.120	14.611	37.652	40.646	44.314	46.928
26	11.160	12.198	13.844	15.379	38.885	41.923	45.642	48.290
27	11.808	12.879	14.573	16.151	40.113	43.194	46.963	49.645
28	12.461	13.565	15.308	16.928	41.337	44.461	48.278	50.993
29	13.121	14.256	16.047	17.708	42.557	45.722	49.588	52.336
30	13.787	14.953	16.791	18.493	43.773	46.979	50.892	53.672

*Abridged from Table 8 of *Biometrika Tables for Statisticians*, Vol. I, by permission of E. S. Pearson and the Biometrika Trustees.

TABLE A.7*
Critical Values of the F Distribution



v_2	v_1								
	1	2	3	4	5	6	7	8	9
1	161.4	199.5	215.7	224.6	230.2	234.0	236.8	238.9	240.5
2	18.51	19.00	19.16	19.25	19.30	19.33	19.35	19.37	19.38
3	10.13	9.55	9.28	9.12	9.01	8.94	8.89	8.85	8.81
4	7.71	6.94	6.59	6.39	6.26	6.16	6.09	6.04	6.00
5	6.61	5.79	5.41	5.19	5.05	4.95	4.88	4.82	4.77
6	5.99	5.14	4.76	4.53	4.39	4.28	4.21	4.15	4.10
7	5.59	4.74	4.35	4.12	3.97	3.87	3.79	3.73	3.68
8	5.32	4.46	4.07	3.84	3.69	3.58	3.50	3.44	3.39
9	5.12	4.26	3.86	3.63	3.48	3.37	3.29	3.23	3.18
10	4.96	4.10	3.71	3.48	3.33	3.22	3.14	3.07	3.02
11	4.84	3.98	3.59	3.36	3.20	3.09	3.01	2.95	2.90
12	4.75	3.89	3.49	3.26	3.11	3.00	2.91	2.85	2.80
13	4.67	3.81	3.41	3.18	3.03	2.92	2.83	2.77	2.71
14	4.60	3.74	3.34	3.11	2.96	2.85	2.76	2.70	2.65
15	4.54	3.68	3.29	3.06	2.90	2.79	2.71	2.64	2.59
16	4.49	3.63	3.24	3.01	2.85	2.74	2.66	2.59	2.54
17	4.45	3.59	3.20	2.96	2.81	2.70	2.61	2.55	2.49
18	4.41	3.55	3.16	2.93	2.77	2.66	2.58	2.51	2.46
19	4.38	3.52	3.13	2.90	2.74	2.63	2.54	2.48	2.42
20	4.35	3.49	3.10	2.87	2.71	2.60	2.51	2.45	2.39
21	4.32	3.47	3.07	2.84	2.68	2.57	2.49	2.42	2.37
22	4.30	3.44	3.05	2.82	2.66	2.55	2.46	2.40	2.34
23	4.28	3.42	3.03	2.80	2.64	2.53	2.44	2.37	2.32
24	4.26	3.40	3.01	2.78	2.62	2.51	2.42	2.36	2.30
25	4.24	3.39	2.99	2.76	2.60	2.49	2.40	2.34	2.28
26	4.23	3.37	2.98	2.74	2.59	2.47	2.39	2.32	2.27
27	4.21	3.35	2.96	2.73	2.57	2.46	2.37	2.31	2.25
28	4.20	3.34	2.95	2.71	2.56	2.45	2.36	2.29	2.24
29	4.18	3.33	2.93	2.70	2.55	2.43	2.35	2.28	2.22
30	4.17	3.32	2.92	2.69	2.53	2.42	2.33	2.27	2.21
40	4.08	3.23	2.84	2.61	2.45	2.34	2.25	2.18	2.12
60	4.00	3.15	2.76	2.53	2.37	2.25	2.17	2.10	2.04
120	3.92	3.07	2.68	2.45	2.29	2.17	2.09	2.02	1.96
∞	3.84	3.00	2.60	2.37	2.21	2.10	2.01	1.94	1.88

*Reproduced from Table 18 of *Biometrika Tables for Statisticians*, Vol. I, by permission of E. S. Pearson and the Biometrika Trustees.

TABLE A.7 (continued)
Critical Values of the F Distribution
 $f_{0.05}(v_1, v_2)$

v_2	v_1									
	10	12	15	20	24	30	40	60	120	∞
1	241.9	243.9	245.9	248.0	249.1	250.1	251.1	252.2	253.3	254.3
2	19.40	19.41	19.43	19.45	19.45	19.46	19.47	19.48	19.49	19.50
3	8.79	8.74	8.70	8.66	8.64	8.62	8.59	8.57	8.55	8.53
4	5.96	5.91	5.86	5.80	5.77	5.75	5.72	5.69	5.66	5.63
5	4.74	4.68	4.62	4.56	4.53	4.50	4.46	4.43	4.40	4.36
6	4.06	4.00	3.94	3.87	3.84	3.81	3.77	3.74	3.70	3.67
7	3.64	3.57	3.51	3.44	3.41	3.38	3.34	3.30	3.27	3.23
8	3.35	3.28	3.22	3.15	3.12	3.08	3.04	3.01	2.97	2.93
9	3.14	3.07	3.01	2.94	2.90	2.86	2.83	2.79	2.75	2.71
10	2.98	2.91	2.85	2.77	2.74	2.70	2.66	2.62	2.58	2.54
11	2.85	2.79	2.72	2.65	2.61	2.57	2.53	2.49	2.45	2.40
12	2.75	2.69	2.62	2.54	2.51	2.47	2.43	2.38	2.34	2.30
13	2.67	2.60	2.53	2.46	2.42	2.38	2.34	2.30	2.25	2.21
14	2.60	2.53	2.46	2.39	2.35	2.31	2.27	2.22	2.18	2.13
15	2.54	2.48	2.40	2.33	2.29	2.25	2.20	2.16	2.11	2.07
16	2.49	2.42	2.35	2.28	2.24	2.19	2.15	2.11	2.06	2.01
17	2.45	2.38	2.31	2.23	2.19	2.15	2.10	2.06	2.01	1.96
18	2.41	2.34	2.27	2.19	2.15	2.11	2.06	2.02	1.97	1.92
19	2.38	2.31	2.23	2.16	2.11	2.07	2.03	1.98	1.93	1.88
20	2.35	2.28	2.20	2.12	2.08	2.04	1.99	1.95	1.90	1.84
21	2.32	2.25	2.18	2.10	2.05	2.01	1.96	1.92	1.87	1.81
22	2.30	2.23	2.15	2.07	2.03	1.98	1.94	1.89	1.84	1.78
23	2.27	2.20	2.13	2.05	2.01	1.96	1.91	1.86	1.81	1.76
24	2.25	2.18	2.11	2.03	1.98	1.94	1.89	1.84	1.79	1.73
25	2.24	2.16	2.09	2.01	1.96	1.92	1.87	1.82	1.77	1.71
26	2.22	2.15	2.07	1.99	1.95	1.90	1.85	1.80	1.75	1.69
27	2.20	2.13	2.06	1.97	1.93	1.88	1.84	1.79	1.73	1.67
28	2.19	2.12	2.04	1.96	1.91	1.87	1.82	1.77	1.71	1.65
29	2.18	2.10	2.03	1.94	1.90	1.85	1.81	1.75	1.70	1.64
30	2.16	2.09	2.01	1.93	1.89	1.84	1.79	1.74	1.68	1.62
40	2.08	2.00	1.92	1.84	1.79	1.74	1.69	1.64	1.58	1.51
60	1.99	1.92	1.84	1.75	1.70	1.65	1.59	1.53	1.47	1.39
120	1.91	1.83	1.75	1.66	1.61	1.55	1.50	1.43	1.35	1.25
∞	1.83	1.75	1.67	1.57	1.52	1.46	1.39	1.32	1.22	1.00

TABLE A.7 (continued)
Critical Values of the F Distribution
 $f_{0.01}(v_1, v_2)$

v_2	v_1								
	1	2	3	4	5	6	7	8	9
1	4052	4999.5	5403	5625	5764	5859	5928	5981	6022
2	98.50	99.00	99.17	99.25	99.30	99.33	99.36	99.37	99.39
3	34.12	30.82	29.46	28.71	28.24	27.91	27.67	27.49	27.35
4	21.20	18.00	16.69	15.98	15.52	15.21	14.98	14.80	14.66
5	16.26	13.27	12.06	11.39	10.97	10.67	10.46	10.29	10.16
6	13.75	10.92	9.78	9.15	8.75	8.47	8.26	8.10	7.98
7	12.25	9.55	8.45	7.85	7.46	7.19	6.99	6.84	6.72
8	11.26	8.65	7.59	7.01	6.63	6.37	6.18	6.03	5.91
9	10.56	8.02	6.99	6.42	6.06	5.80	5.61	5.47	5.35
10	10.04	7.56	6.55	5.99	5.64	5.39	5.20	5.06	4.94
11	9.65	7.21	6.22	5.67	5.32	5.07	4.89	4.74	4.63
12	9.33	6.93	5.95	5.41	5.06	4.82	4.64	4.50	4.39
13	9.07	6.70	5.74	5.21	4.86	4.62	4.44	4.30	4.19
14	8.86	6.51	5.56	5.04	4.69	4.46	4.28	4.14	4.03
15	8.68	6.36	5.42	4.89	4.56	4.32	4.14	4.00	3.89
16	8.53	6.23	5.29	4.77	4.44	4.20	4.03	3.89	3.78
17	8.40	6.11	5.18	4.67	4.34	4.10	3.93	3.79	3.68
18	8.29	6.01	5.09	4.58	4.25	4.01	3.84	3.71	3.60
19	8.18	5.93	5.01	4.50	4.17	3.94	3.77	3.63	3.52
20	8.10	5.85	4.94	4.43	4.10	3.87	3.70	3.56	3.46
21	8.02	5.78	4.87	4.37	4.04	3.81	3.64	3.51	3.40
22	7.95	5.72	4.82	4.31	3.99	3.76	3.59	3.45	3.35
23	7.88	5.66	4.76	4.26	3.94	3.71	3.54	3.41	3.30
24	7.82	5.61	4.72	4.22	3.90	3.67	3.50	3.36	3.26
25	7.77	5.57	4.68	4.18	3.85	3.63	3.46	3.32	3.22
26	7.72	5.53	4.64	4.14	3.82	3.59	3.42	3.29	3.18
27	7.68	5.49	4.60	4.11	3.78	3.56	3.39	3.26	3.15
28	7.64	5.45	4.57	4.07	3.75	3.53	3.36	3.23	3.12
29	7.60	5.42	4.54	4.04	3.73	3.50	3.33	3.20	3.09
30	7.56	5.39	4.51	4.02	3.70	3.47	3.30	3.17	3.07
40	7.31	5.18	4.31	3.83	3.51	3.29	3.12	2.99	2.89
60	7.08	4.98	4.13	3.65	3.34	3.12	2.95	2.82	2.72
120	6.85	4.79	3.95	3.48	3.17	2.96	2.79	2.66	2.56
∞	6.63	4.61	3.78	3.32	3.02	2.80	2.64	2.51	2.41

TABLE A.7 (continued)
Critical Values of the F Distribution

$$f_{0.01}(v_1, v_2)$$

v_2	v_1									
	10	12	15	20	24	30	40	60	120	∞
1	6056	6106	6157	6209	6235	6261	6287	6313	6339	6366
2	99.40	99.42	99.43	99.45	99.46	99.47	99.47	99.48	99.49	99.50
3	27.23	27.05	26.87	26.69	26.60	26.50	26.41	26.32	26.22	26.13
4	14.55	14.37	14.20	14.02	13.93	13.84	13.75	13.65	13.56	13.46
5	10.05	9.89	9.72	9.55	9.47	9.38	9.29	9.20	9.11	9.02
6	7.87	7.72	7.56	7.40	7.31	7.23	7.14	7.06	6.97	6.88
7	6.62	6.47	6.31	6.16	6.07	5.99	5.91	5.82	5.74	5.65
8	5.81	5.67	5.52	5.36	5.28	5.20	5.12	5.03	4.95	4.86
9	5.26	5.11	4.96	4.81	4.73	4.65	4.57	4.48	4.40	4.31
10	4.85	4.71	4.56	4.41	4.33	4.25	4.17	4.08	4.00	3.91
11	4.54	4.40	4.25	4.10	4.02	3.94	3.86	3.78	3.69	3.60
12	4.30	4.16	4.01	3.86	3.78	3.70	3.62	3.54	3.45	3.36
13	4.10	3.96	3.82	3.66	3.59	3.51	3.43	3.34	3.25	3.17
14	3.94	3.80	3.66	3.51	3.43	3.35	3.27	3.18	3.09	3.00
15	3.80	3.67	3.52	3.37	3.29	3.21	3.13	3.05	2.96	2.87
16	3.69	3.55	3.41	3.26	3.18	3.10	3.02	2.93	2.84	2.75
17	3.59	3.46	3.31	3.16	3.08	3.00	2.92	2.83	2.75	2.65
18	3.51	3.37	3.23	3.08	3.00	2.92	2.84	2.75	2.66	2.57
19	3.43	3.30	3.15	3.00	2.92	2.84	2.76	2.67	2.58	2.49
20	3.37	3.23	3.09	2.94	2.86	2.78	2.69	2.61	2.52	2.42
21	3.31	3.17	3.03	2.88	2.80	2.72	2.64	2.55	2.46	2.36
22	3.26	3.12	2.98	2.83	2.75	2.67	2.58	2.50	2.40	2.31
23	3.21	3.07	2.93	2.78	2.70	2.62	2.54	2.45	2.35	2.26
24	3.17	3.03	2.89	2.74	2.66	2.58	2.49	2.40	2.31	2.21
25	3.13	2.99	2.85	2.70	2.62	2.54	2.45	2.36	2.27	2.17
26	3.09	2.96	2.81	2.66	2.58	2.50	2.42	2.33	2.23	2.13
27	3.06	2.93	2.78	2.63	2.55	2.47	2.38	2.29	2.20	2.10
28	3.03	2.90	2.75	2.60	2.52	2.44	2.35	2.26	2.17	2.06
29	3.00	2.87	2.73	2.57	2.49	2.41	2.33	2.23	2.14	2.03
30	2.98	2.84	2.70	2.55	2.47	2.39	2.30	2.21	2.11	2.01
40	2.80	2.66	2.52	2.37	2.29	2.20	2.11	2.02	1.92	1.80
60	2.63	2.50	2.35	2.20	2.12	2.03	1.94	1.84	1.73	1.60
120	2.47	2.34	2.19	2.03	1.95	1.86	1.76	1.66	1.53	1.38
∞	2.32	2.18	2.04	1.88	1.79	1.70	1.59	1.47	1.32	1.00