

UNIVERSITY OF SWAZILAND



SUPPLEMENTARY EXAMINATION PAPER 2015

- TITLE OF PAPER :** QUANTITATIVE METHODS IN DEMOGRAPHY
- COURSE CODE :** DEM 206
- TIME ALLOWED :** TWO (2) HOURS
- INSTRUCTIONS :** ANSWER ANY THREE QUESTIONS.
- REQUIREMENTS :** SCIENTIFIC CALCULATOR AND STATISTICAL TABLES.

Question 1

Compare and contrast the following terms:

- i) Qualitative data and quantitative data 4 marks
 - ii) Dependent variable and independent variable 4 marks
 - iii) Probability sampling and non-probability sampling 4 marks
 - iv) Confidence interval and p-value 4 marks
 - v) Simple linear regression model and multiple regression model 4 marks
- [20 marks]**

Question 2

A group of female managers has lodged a complaint with the personnel department. They feel that women tend to remain in low level management positions when promotions are handed out. The personnel department has obtained data in which managers have been employed for at least 1 year. The data is summarised in the following contingency table.

Promoted	Gender		Total
	Male M	Female F	
Yes Y	288	36	324
No N	672	204	876
Total	960	240	1200

- i) Calculate the probability that a manager is promoted 1 mark
 - ii) Calculate the probability that a manager is not promoted 1 mark
 - iii) Calculate the probability that a manager is a male 1 mark
 - iv) Calculate the probability that a manager is both male and promoted 1 mark
 - v) Given that a manager is a male, find the probability that he is promoted 2 marks
 - vi) Are the two events statistically independent? 2 marks
 - vii) Are the two events mutually exclusive? 2 marks
 - viii) Calculate the probability that a female manager is promoted 2 marks
 - xi) Calculate the probability that a female manager is not promoted 2 marks
 - x) Investigate $P(N \cup F)$ 3 marks
 - ix) Investigate independence with $P(M)$ and $P(M|Y)$. 3 marks
- [20 marks]**

Question 3

a. 30% of applicants for a position have advanced training in computer programming. Applicants are interviewed sequentially and are selected at random from the pool. Let Y = number of interviews until the first successful applicant

- i) Find the probability of selecting the first applicant with the advanced training on the fifth interview. 4 marks
- ii) Calculate the expected value and standard deviation of Y . 4 marks

- b. Scores on an examination are assumed to be normally distributed with mean 78 and variance 25.
- i) What is the probability that a person taking the examination scores higher than 72? 2 marks
 - ii) Suppose that students scoring in the top 10% of this distribution are to receive an A grade. What is the minimum score a student must receive to earn an A grade? 2 marks
 - iii) What must be the cut-off point for passing the examination if the examiner wants only the top 28.1% of all scores to be passing? 2 marks
 - iv) Approximately what proportion of students have scores 5 or more points above the score that cuts off the lowest 25%. 3 marks
 - v) If it is known that a student's score exceeds 72, what is the probability that his/her score exceeds 84? 3 marks
- [20 marks]**

Question 4

- a. Reaction A or B occurs to a stimulus in a psychological experiment. If an experimenter wants to estimate the probability p that a person will react in manner A, how many people must be included in the experiment? Assume that the experimenter will be satisfied if the error of estimation is less than 0.04 with probability equal to 0.90. Also assume that he expects p to lie in the neighbourhood of 0.6. 10 marks
- b. The number of kids' meals sold per day is known to be normally distributed with mean 30. A new advertising campaign offers a small toy with every kid's meal. In order to evaluate the success of the campaign a random sample of 18 business days is drawn yielding an average number of 40 kids' meals sold per day with standard deviation of 12. Answer the following questions:
 - i) Formulate the appropriate null and alternative hypothesis to test whether there is substantial evidence that the advertising campaign was successful. 2 marks
 - ii) In terms of this problem, what is a type I error? 2 marks
 - iii) Calculate the appropriate test statistic for the test in i). 3 marks
 - iv) A 95% lower confidence limit for μ , the average number of kid's meals sold after the campaign, is given by 35.08. Do you think the campaign was successful on a 5% level of significance? Motivate your answer in terms of the confidence interval. 3 marks

[20 marks]

Question 5

- a. A psychological test was conducted to compare the reaction times for men and women to a stimulus. Independent random samples of 50 men and 50 women were employed in the experiment. Do the data present sufficient evidence to suggest a difference between the true mean reaction times for men and women? Use $\alpha = 0.05$.

Men	Women
$n_1 = 50$	$n_2 = 50$
$\bar{y}_1 = 3.6$ seconds	$\bar{y}_2 = 3.8$ seconds
$s_1^2 = 0.18$	$s_2^2 = 0.14$

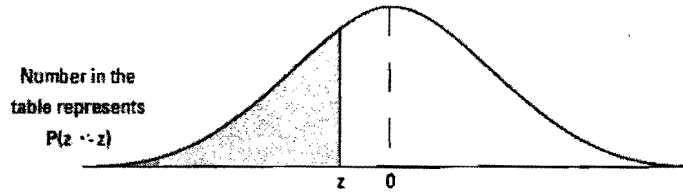
10 marks

- b. A company produces condoms that are supposed to have a diameter variance no larger than 0.0002 (diameters measured in inches). A random sample of 10 condoms gave a sample variance of 0.0003. Test, at a 5% level of significance and assume measured diameters are normally distributed.

10 marks

[20 marks]

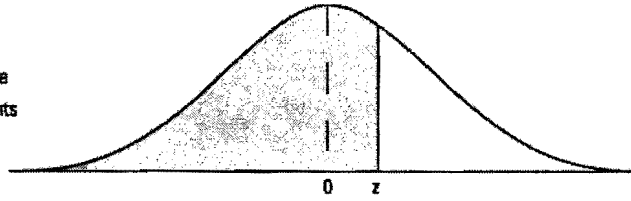
Table A-2 The cdf of the Z Distribution (the Z Table)



z	0.00	0.01	0.02	0.03	0.04	0.05	0.06	0.07	0.08	0.09
-3.6	.0002	.0002	.0001	.0001	.0001	.0001	.0001	.0001	.0001	.0001
-3.5	.0002	.0002	.0002	.0002	.0002	.0002	.0002	.0002	.0002	.0002
-3.4	.0003	.0003	.0003	.0003	.0003	.0003	.0003	.0003	.0002	.0002
-3.3	.0005	.0005	.0005	.0004	.0004	.0004	.0004	.0004	.0003	.0003
-3.2	.0007	.0007	.0006	.0006	.0006	.0006	.0006	.0005	.0005	.0005
-3.1	.0010	.0009	.0009	.0009	.0008	.0008	.0008	.0008	.0007	.0007
-3.0	.0013	.0013	.0013	.0012	.0012	.0011	.0011	.0011	.0010	.0010
-2.9	.0019	.0018	.0018	.0017	.0016	.0016	.0015	.0015	.0014	.0014
-2.8	.0026	.0025	.0024	.0023	.0023	.0022	.0021	.0021	.0020	.0019
-2.7	.0035	.0034	.0033	.0032	.0031	.0030	.0029	.0028	.0027	.0026
-2.6	.0047	.0045	.0044	.0043	.0041	.0040	.0039	.0038	.0037	.0036
-2.5	.0062	.0060	.0059	.0057	.0055	.0054	.0052	.0051	.0049	.0048
-2.4	.0082	.0080	.0078	.0075	.0073	.0071	.0069	.0068	.0066	.0064
-2.3	.0107	.0104	.0102	.0099	.0096	.0094	.0091	.0089	.0087	.0084
-2.2	.0139	.0136	.0132	.0129	.0125	.0122	.0119	.0116	.0113	.0110
-2.1	.0179	.0174	.0170	.0166	.0162	.0158	.0154	.0150	.0146	.0143
-2.0	.0228	.0222	.0217	.0212	.0207	.0202	.0197	.0192	.0188	.0183
-1.9	.0287	.0281	.0274	.0268	.0262	.0256	.0250	.0244	.0239	.0233
-1.8	.0359	.0351	.0344	.0336	.0329	.0322	.0314	.0307	.0301	.0294
-1.7	.0446	.0438	.0427	.0418	.0409	.0401	.0392	.0384	.0375	.0367
-1.6	.0548	.0537	.0526	.0516	.0505	.0495	.0485	.0475	.0465	.0455
-1.5	.0668	.0655	.0643	.0630	.0618	.0606	.0594	.0582	.0571	.0559
-1.4	.0808	.0793	.0778	.0764	.0749	.0735	.0721	.0708	.0694	.0681
-1.3	.0968	.0951	.0934	.0918	.0901	.0885	.0869	.0853	.0838	.0823
-1.2	.1151	.1131	.1112	.1093	.1075	.1056	.1038	.1020	.1003	.0985
-1.1	.1357	.1335	.1314	.1292	.1271	.1251	.1230	.1210	.1190	.1170
-1.0	.1587	.1562	.1539	.1515	.1492	.1469	.1446	.1423	.1401	.1379
-0.9	.1841	.1814	.1788	.1762	.1736	.1711	.1685	.1660	.1635	.1611
-0.8	.2119	.2090	.2061	.2033	.2005	.1977	.1949	.1922	.1894	.1867
-0.7	.2420	.2389	.2358	.2327	.2296	.2266	.2236	.2206	.2177	.2148
-0.6	.2743	.2709	.2676	.2643	.2611	.2578	.2546	.2514	.2483	.2451
-0.5	.3085	.3050	.3015	.2981	.2946	.2912	.2877	.2843	.2810	.2776
-0.4	.3446	.3409	.3372	.3336	.3300	.3264	.3228	.3192	.3156	.3121
-0.3	.3821	.3783	.3745	.3707	.3669	.3632	.3594	.3557	.3520	.3483
-0.2	.4207	.4168	.4129	.4090	.4052	.4013	.3974	.3936	.3897	.3859
-0.1	.4602	.4562	.4522	.4483	.4443	.4404	.4364	.4325	.4286	.4247
-0.0	.5000	.4960	.4920	.4880	.4840	.4801	.4761	.4721	.4681	.4641

Table A-2 (continued)

Number in the
table represents
 $P(z \leq z)$



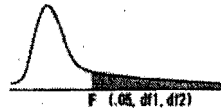
z	0.00	0.01	0.02	0.03	0.04	0.05	0.06	0.07	0.08	0.09
0.0	.5000	.5040	.5080	.5120	.5160	.5199	.5239	.5279	.5319	.5359
0.1	.5398	.5438	.5478	.5517	.5557	.5596	.5636	.5675	.5714	.5753
0.2	.5793	.5832	.5871	.5910	.5948	.5987	.6026	.6064	.6103	.6141
0.3	.6179	.6217	.6255	.6293	.6331	.6368	.6406	.6443	.6480	.6517
0.4	.6554	.6591	.6628	.6664	.6700	.6736	.6772	.6808	.6844	.6879
0.5	.6915	.6950	.6985	.7019	.7054	.7088	.7123	.7157	.7190	.7224
0.6	.7257	.7291	.7324	.7357	.7389	.7422	.7454	.7486	.7517	.7549
0.7	.7580	.7611	.7642	.7673	.7704	.7734	.7764	.7794	.7823	.7852
0.8	.7881	.7910	.7939	.7967	.7995	.8023	.8051	.8078	.8106	.8133
0.9	.8159	.8186	.8212	.8238	.8264	.8289	.8315	.8340	.8365	.8389
1.0	.8413	.8438	.8461	.8485	.8508	.8531	.8554	.8577	.8599	.8621
1.1	.8643	.8665	.8686	.8708	.8729	.8749	.8770	.8790	.8810	.8830
1.2	.8849	.8869	.8888	.8907	.8925	.8944	.8962	.8980	.8997	.9015
1.3	.9032	.9049	.9066	.9082	.9099	.9115	.9131	.9147	.9162	.9177
1.4	.9192	.9207	.9222	.9236	.9251	.9265	.9279	.9292	.9306	.9319
1.5	.9332	.9345	.9357	.9370	.9382	.9394	.9406	.9418	.9429	.9441
1.6	.9452	.9463	.9474	.9484	.9495	.9505	.9515	.9525	.9535	.9545
1.7	.9554	.9564	.9573	.9582	.9591	.9599	.9608	.9616	.9625	.9633
1.8	.9641	.9649	.9656	.9664	.9671	.9678	.9686	.9693	.9699	.9706
1.9	.9713	.9719	.9726	.9732	.9738	.9744	.9750	.9756	.9761	.9767
2.0	.9772	.9778	.9783	.9788	.9793	.9798	.9803	.9808	.9812	.9817
2.1	.9821	.9826	.9830	.9834	.9838	.9842	.9846	.9850	.9854	.9857
2.2	.9861	.9864	.9868	.9871	.9875	.9878	.9881	.9884	.9887	.9890
2.3	.9893	.9896	.9898	.9901	.9904	.9906	.9909	.9911	.9913	.9916
2.4	.9918	.9920	.9922	.9925	.9927	.9929	.9931	.9932	.9934	.9936
2.5	.9938	.9940	.9941	.9943	.9945	.9946	.9948	.9949	.9951	.9952
2.6	.9953	.9955	.9956	.9957	.9959	.9960	.9961	.9962	.9963	.9964
2.7	.9965	.9966	.9967	.9968	.9969	.9970	.9971	.9972	.9973	.9974
2.8	.9974	.9975	.9976	.9977	.9977	.9978	.9979	.9979	.9980	.9981
2.9	.9981	.9982	.9982	.9983	.9984	.9984	.9985	.9985	.9986	.9986
3.0	.9987	.9987	.9987	.9988	.9988	.9989	.9989	.9989	.9990	.9990
3.1	.9990	.9991	.9991	.9991	.9992	.9992	.9992	.9992	.9993	.9993
3.2	.9993	.9993	.9994	.9994	.9994	.9994	.9994	.9995	.9995	.9995
3.3	.9995	.9995	.9995	.9996	.9996	.9996	.9996	.9996	.9996	.9997
3.4	.9997	.9997	.9997	.9997	.9997	.9997	.9997	.9997	.9997	.9998
3.5	.9998	.9998	.9998	.9998	.9998	.9998	.9998	.9998	.9998	.9998
3.6	.9998	.9998	.9999	.9999	.9999	.9999	.9999	.9999	.9999	.9999

t Distribution: Critical Values of t

Degrees of freedom	Two-tailed test: One-tailed test:	Significance level					
		10% 5%	5% 2.5%	2% 1%	1% 0.5%	0.2% 0.1%	0.1% 0.05%
1		6.314	12.706	31.821	63.657	318.309	636.619
2		2.920	4.303	6.965	9.925	22.327	31.599
3		2.353	3.182	4.541	5.841	10.215	12.924
4		2.132	2.776	3.747	4.604	7.173	8.610
5		2.015	2.571	3.365	4.032	5.893	6.869
6		1.943	2.447	3.143	3.707	5.208	5.959
7		1.894	2.365	2.998	3.499	4.785	5.408
8		1.860	2.306	2.896	3.355	4.501	5.041
9		1.833	2.262	2.821	3.250	4.297	4.781
10		1.812	2.228	2.764	3.169	4.144	4.587
11		1.796	2.201	2.718	3.106	4.025	4.437
12		1.782	2.179	2.681	3.055	3.930	4.318
13		1.771	2.160	2.650	3.012	3.852	4.221
14		1.761	2.145	2.624	2.977	3.787	4.140
15		1.753	2.131	2.602	2.947	3.733	4.073
16		1.746	2.120	2.583	2.921	3.686	4.015
17		1.740	2.110	2.567	2.898	3.646	3.965
18		1.734	2.101	2.552	2.878	3.610	3.922
19		1.729	2.093	2.539	2.861	3.579	3.883
20		1.725	2.086	2.528	2.845	3.552	3.850
21		1.721	2.080	2.518	2.831	3.527	3.819
22		1.717	2.074	2.508	2.819	3.505	3.792
23		1.714	2.069	2.500	2.807	3.485	3.768
24		1.711	2.064	2.492	2.797	3.467	3.745
25		1.708	2.060	2.485	2.787	3.450	3.725
26		1.706	2.056	2.479	2.779	3.435	3.707
27		1.703	2.052	2.473	2.771	3.421	3.690
28		1.701	2.048	2.467	2.763	3.408	3.674
29		1.699	2.045	2.462	2.756	3.396	3.659
30		1.697	2.042	2.457	2.750	3.385	3.646
32		1.694	2.037	2.449	2.738	3.365	3.622
34		1.691	2.032	2.441	2.728	3.348	3.601
36		1.688	2.028	2.434	2.719	3.333	3.582
38		1.686	2.024	2.429	2.712	3.319	3.566
40		1.684	2.021	2.423	2.704	3.307	3.551
42		1.682	2.018	2.418	2.698	3.296	3.538
44		1.680	2.015	2.414	2.692	3.286	3.526
46		1.679	2.013	2.410	2.687	3.277	3.515
48		1.677	2.011	2.407	2.682	3.269	3.505
50		1.676	2.009	2.403	2.678	3.261	3.496
60		1.671	2.000	2.390	2.660	3.232	3.460
70		1.667	1.994	2.381	2.648	3.211	3.435
80		1.664	1.990	2.374	2.639	3.195	3.416
90		1.662	1.987	2.368	2.632	3.183	3.402
100		1.660	1.984	2.364	2.626	3.174	3.390
120		1.658	1.980	2.358	2.617	3.160	3.373
150		1.655	1.976	2.351	2.609	3.145	3.357
200		1.653	1.972	2.345	2.601	3.131	3.340
300		1.650	1.968	2.339	2.592	3.118	3.323
400		1.649	1.966	2.336	2.588	3.111	3.315
500		1.648	1.965	2.334	2.586	3.107	3.310
600		1.647	1.964	2.333	2.584	3.104	3.307
∞		1.645	1.960	2.326	2.576	3.090	3.291

Table A-5

The F-Table



df1/df2	1	2	3	4	5	6	7	8	9	10	12	15	20	24	30	40	60	120
1	161.4476	199.5000	215.7073	224.5832	230.1819	233.9860	236.7894	238.8827	240.5433	241.8817	243.9060	245.9499	248.0131	249.0518	250.0951	251.1432	252.1957	253.252
2	18.5128	19.0000	19.1643	19.2468	19.2964	19.3295	19.3532	19.3710	19.3848	19.3959	19.4125	19.4291	19.4458	19.4541	19.4624	19.4707	19.4791	19.487
3	10.1280	9.5521	9.2766	9.1172	9.0135	8.9408	8.8867	8.8452	8.8123	8.7855	8.7448	8.7029	8.6602	8.6385	8.6166	8.5944	8.5720	8.549
4	7.7086	6.9443	6.5914	6.3882	6.2561	6.1831	6.0942	6.0410	5.9988	5.9644	5.9117	5.8578	5.8025	5.7744	5.7459	5.7170	5.6877	5.658
5	6.8079	5.7861	5.4095	5.1922	5.0503	4.9503	4.8759	4.8183	4.7725	4.7351	4.6777	4.6188	4.5581	4.5272	4.4957	4.4638	4.4314	4.398
6	5.9874	5.1433	4.7571	4.5337	4.3874	4.2839	4.2067	4.1468	4.0990	4.0600	3.9999	3.9391	3.8742	3.8415	3.8082	3.7743	3.7398	3.704
7	5.5914	4.7374	4.3468	4.1203	3.9715	3.8660	3.7870	3.7257	3.6787	3.6365	3.5747	3.5107	3.4445	3.4105	3.3758	3.3404	3.3043	3.267
8	5.3177	4.4590	4.0662	3.8379	3.6875	3.5806	3.5005	3.4381	3.3881	3.3472	3.2839	3.2184	3.1503	3.1152	3.0794	3.0428	3.0053	2.966
9	5.1174	4.2565	3.8625	3.6331	3.4817	3.3738	3.2927	3.2296	3.1789	3.1373	3.0729	3.0061	2.9365	2.9005	2.8637	2.8259	2.7872	2.747
10	4.9646	4.1028	3.7083	3.4780	3.3258	3.2172	3.1355	3.0717	3.0204	2.9782	2.9130	2.8450	2.7740	2.7372	2.6996	2.6609	2.6211	2.580
11	4.8443	3.9823	3.5874	3.3567	3.2039	3.0946	3.0123	2.9480	2.8962	2.8536	2.7876	2.7186	2.6464	2.6090	2.5705	2.5309	2.4901	2.448
12	4.7472	3.8853	3.4903	3.2592	3.1059	2.9961	2.9134	2.8486	2.7964	2.7534	2.6866	2.6168	2.5436	2.5055	2.4663	2.4258	2.3842	2.341
13	4.6672	3.8056	3.4105	3.1791	3.0254	2.9153	2.8321	2.7669	2.7144	2.6710	2.6037	2.5331	2.4589	2.4202	2.3803	2.3392	2.2966	2.252
14	4.6001	3.7389	3.3439	3.1122	2.9582	2.8477	2.7642	2.6987	2.6458	2.6022	2.5342	2.4630	2.3879	2.3487	2.3082	2.2664	2.2229	2.177
15	4.5431	3.6823	3.2874	3.0556	2.9013	2.7905	2.7066	2.6408	2.5876	2.5437	2.4753	2.4034	2.3275	2.2878	2.2468	2.2043	2.1601	2.114
16	4.4940	3.6337	3.2389	3.0069	2.8524	2.7413	2.6572	2.5911	2.5377	2.4935	2.4247	2.3522	2.2756	2.2354	2.1938	2.1507	2.1058	2.058
17	4.4513	3.5915	3.1968	2.9647	2.8100	2.6987	2.6143	2.5480	2.4943	2.4499	2.3807	2.3077	2.2304	2.1898	2.1477	2.1040	2.0584	2.010
18	4.4139	3.5540	3.1599	2.9277	2.7729	2.6613	2.5767	2.5102	2.4563	2.4117	2.3421	2.2686	2.1906	2.1497	2.1071	2.0629	2.0166	1.968
19	4.3807	3.5219	3.1274	2.8951	2.7401	2.6283	2.5435	2.4768	2.4227	2.3779	2.3080	2.2341	2.1555	2.1141	2.0712	2.0264	1.9795	1.930
20	4.3512	3.4928	3.0984	2.8661	2.7109	2.5990	2.5140	2.4471	2.3928	2.3479	2.2776	2.2033	2.1242	2.0825	2.0391	1.9938	1.9464	1.896
21	4.3248	3.4668	3.0725	2.8401	2.6848	2.5727	2.4876	2.4205	2.3660	2.3210	2.2504	2.1757	2.0960	2.0540	2.0102	1.9645	1.9165	1.865
22	4.3009	3.4434	3.0491	2.8167	2.6613	2.5491	2.4638	2.3965	2.3419	2.2967	2.2258	2.1508	2.0707	2.0283	1.9842	1.9380	1.8894	1.838
23	4.2793	3.4221	3.0280	2.7955	2.6400	2.5277	2.4422	2.3748	2.3201	2.2747	2.2036	2.1282	2.0476	2.0050	1.9605	1.9139	1.8648	1.812
24	4.2587	3.4028	3.0088	2.7763	2.6207	2.5082	2.4226	2.3551	2.3002	2.2547	2.1834	2.1077	2.0267	1.9838	1.9390	1.8920	1.8424	1.789
25	4.2417	3.3852	2.9912	2.7587	2.6030	2.4904	2.4047	2.3371	2.2821	2.2365	2.1649	2.0889	2.0075	1.9643	1.9192	1.8718	1.8217	1.768
26	4.2252	3.3690	2.9752	2.7428	2.5868	2.4741	2.3883	2.3205	2.2655	2.2197	2.1479	2.0716	1.9898	1.9464	1.9010	1.8533	1.8027	1.748
27	4.2100	3.3541	2.9604	2.7278	2.5719	2.4591	2.3732	2.3053	2.2501	2.2043	2.1323	2.0558	1.9736	1.9299	1.8842	1.8361	1.7851	1.730
28	4.1960	3.3404	2.9467	2.7141	2.5581	2.4453	2.3593	2.2913	2.2360	2.1900	2.1179	2.0411	1.9586	1.9147	1.8687	1.8203	1.7689	1.713
29	4.1830	3.3277	2.9340	2.7014	2.5454	2.4324	2.3463	2.2783	2.2229	2.1768	2.1045	2.0275	1.9446	1.9005	1.8543	1.8055	1.7537	1.698
30	4.1709	3.3158	2.9223	2.6896	2.5336	2.4205	2.3343	2.2662	2.2107	2.1646	2.0921	2.0148	1.9317	1.8874	1.8409	1.7918	1.7396	1.683
40	4.0847	3.2317	2.8387	2.6060	2.4495	2.3359	2.2490	2.1802	2.1240	2.0772	2.0035	1.9245	1.8399	1.7929	1.7444	1.6928	1.6373	1.576
60	4.0012	3.1504	2.7581	2.5252	2.3683	2.2541	2.1665	2.0970	2.0401	1.9928	1.9174	1.8364	1.7480	1.7001	1.6491	1.5943	1.5343	1.467
120	3.9201	3.0718	2.6802	2.4472	2.2899	2.1750	2.0868	2.0164	1.9588	1.9105	1.8337	1.7505	1.6587	1.6084	1.5543	1.4952	1.4290	1.351

Table A-3**The Chi-Square Table**Numbers in the table represent Chi-square values whose area to the right equals α .

df/α	0.10	0.05	0.025	0.01	0.005
1	2.71	3.84	5.02	6.64	7.88
2	4.61	5.99	7.38	9.21	10.60
3	6.25	7.82	9.35	11.35	12.84
4	7.78	9.49	11.14	13.28	14.86
5	9.24	11.07	12.83	15.09	16.75
6	10.65	12.59	14.45	16.81	18.55
7	12.02	14.07	16.01	18.48	20.28
8	13.36	15.51	17.54	20.09	21.96
9	14.68	16.92	19.02	21.67	23.59
10	15.99	18.31	20.48	23.21	25.19
11	17.28	19.68	21.92	24.73	26.76
12	18.55	21.03	23.34	26.22	28.30
13	19.81	22.36	24.74	27.69	29.819
14	21.06	23.69	26.12	29.14	31.32
15	22.31	25.00	27.49	30.58	32.80
16	23.54	26.30	28.85	32.00	34.27
17	24.77	27.59	30.19	33.41	35.72
18	25.99	28.87	31.53	34.81	37.16
19	27.20	30.14	32.85	36.19	38.58
20	28.41	31.41	34.17	37.57	40.00
21	29.62	32.67	35.48	38.93	41.40
22	30.81	33.92	36.78	40.29	42.80
23	32.01	35.17	38.08	41.64	44.18
24	33.20	36.42	39.36	42.98	45.56
25	34.38	37.65	40.65	44.31	46.93
26	35.56	38.89	41.92	45.64	48.29
27	36.74	40.11	43.20	46.96	49.65
28	37.92	41.34	44.46	48.28	50.99
29	39.09	42.56	45.72	49.59	52.34
30	40.26	43.77	46.98	50.89	53.67
40	51.81	55.76	59.34	63.69	66.77
50	63.17	67.51	71.42	76.15	79.49