

DEPARTMENT OF STATISTICS AND DEMOGRAPHY

MAIN EXAMINATION, 2015/16

COURSE TITLE: STATISTICAL INFERENCE I

COURSE CODE: ST 232

TIME ALLOWED: TWO (2) HOURS

INSTRUCTION:

1. THIS PAPER CONSISTS OF TEN (10) QUESTIONS;
2. ANSWER ALL QUESTIONS FROM SECTION A & ANY TWO (2) FROM SECTION B

SPECIAL REQUIREMENTS: SCIENTIFIC CALCULATORS AND STATISTICAL TABLES

DO NOT OPEN THIS PAGE UNTIL PERMISSION HAS BEEN GRANTED BY THE CHIEF INVIGILATOR

SECTION A

Question 1

- (a) Assume that the numbers given in the cells of the Table give the probabilities of a randomly selected individual falling into the given cell.

	Gets Cancer	Does Not Get Cancer
Smoker	0.50	0.20
Non-smoker	0.10	0.20

If we let A be the event that the selected individual is a smoker and let B be the event that the selected individual gets cancer. Are events A and B independent? (5 marks)

- (b) An investor buys five single-residence dwellings as an investment. He assumes that the probability that he will make a profit on each one is 0.9. Assuming independence.
- (i) What is the probability that he makes profit on each one?
(ii) What is the probability that he makes a loss on each one?

(5 marks)

Question 2

- (a) A bag contains 10 flashbulbs, 8 of which are good. If 5 flashbulbs are chosen from the bag at random, what is the probability function for the number of good flashbulbs? For the number of bad bulbs? (10 marks)

Question 3

- (a) Gauges are used to reject all components where a certain dimension is not within the specification $1.50 \pm d$. It is known that this measurement is normally distributed with mean 1.50 and a standard deviation of 0.2. Determine the value of 'd' such that the specifications cover 95% of the measurements. (5 marks)
- (b) An electrical firm manufactures light bulbs that have a length of life that is approximately normally distributed, with mean equal to 800 hours and a standard deviation of 40 hours. Find the probability that a random sample of 16 bulbs will have an average life of less than 775 hours. (5 marks)

Question 4

Assume a government agency desires to estimate the miles per gallon that a particular new (make and model) car is capable of attaining. To do this, the agency acquires one of these cars, fills the gas tank, and then a trained driver drives the car for 100 miles: the gas tank is then refilled and the same driver drives the car 100 miles, at which time it is again refilled and driven 100 miles, and so on. This operation is performed a total of $n = 10$ times; the number of gallons needed to fill the gas tank these 10 times are: 4.78, 4.42, 3.94, 4.15, 4.90, 3.92, 3.94, 4.68, 4.32, 4.23.

Assuming these values are a random sample from a normal population with mean μ and variance σ^2 ,

- (a) Compute estimates for μ and σ .
(b) Compute the 90% confidence limits for μ , the number of gallons needed to drive the car a 100 miles. (10 marks)

Question 5

In a certain region of the country it is known from past experience that the probability of selecting an adult over 40 years of age with cancer is 0.05. If the probability of a doctor correctly diagnosing a person with cancer as having the disease is 0.78 and the probability of incorrectly diagnosing a person without cancer as having cancer is 0.06.

- (a) What is the probability that a person is diagnosed as having cancer?
 (b) What is the probability that a person diagnosed as having cancer actually has the disease?

(10 marks)**Question 6**

- (a) A sample of 16 items from population 1 has a sample variance of 5.8 and a sample of 21 items from population 2 has a sample variance of 2.4. Test the following hypotheses at the 0.05 level of significance.

(10 marks)

$$H_0 : \sigma_1^2 = \sigma_2^2$$

$$H_1 : \sigma_1^2 > \sigma_2^2$$

SECTION B**Question 7**

- (a) The records of a hospital show that 52 men in a sample of 1000 men versus 23 women in a sample of 1000 were admitted because of heart disease. Do these data present sufficient evidence to indicate a higher rate of heart disease among men admitted to the hospital? Use $\alpha = 0.05$
- (b) Independent random samples of 36 and 45 observations are drawn from two quantitative populations, 1 and 2, respectively. The sample data summary is shown below:

(10 marks)

	Sample 1	Sample 2
Sample size	36	45
Sample mean	1.24	1.31
Sample variance	0.056	0.054

Do the data present sufficient evidence to indicate that the mean for population 1 is smaller than the mean for population 2? Explain your conclusions.

(10 marks)

Question 8

A random sample of 4000 individuals (all male of the same age) yielded the following data.

Highest Education attained	Annual Income (in E)			Total
	Less than 5000	5,000 to 15,000	More than 15,000	
Elementary school	350	35	15	400
High school	100	850	50	1000
College	40	1200	760	2000
Graduate	10	415	175	600
Total	500	2500	1000	4000

Test the hypothesis that annual income (for males of this age) is independent of education attained, with $\alpha = 0.1$. **(20 marks)**

Question 9

Four treatments were compared using a completely randomized design. The data are shown below:

	Treatment			
	1	2	3	4
	124	147	141	117
	167	121	144	128
	135	136	139	102
	160	114	162	119
	159	129	155	128
	144	117	150	123
	133	109		

Do the data provide sufficient evidence to indicate a difference in location for at least two of the population distributions? Test using the Kruskal-Wallis H statistic with $\alpha=0.05$.

(20 marks)**Question 10**

A random sample of nine students was selected to test for the effectiveness of a special course designed to improve memory. The following table gives the results of memory test given to these students before and after this course.

Before	43	57	48	65	81	49	38	69	58
After	49	56	55	77	89	57	36	64	69

(a) Construct a 95% confidence interval for the mean μ_d of the population paired differences, where a paired difference is defined as the difference between the memory test scores of a student before and after attending this course. **(10 marks)**

(b) Test at the 1% significance level whether this course makes any statistically significant improvement in the memory of all students. **(10 marks)**

END OF EXAM!!

Standard Normal Probabilities

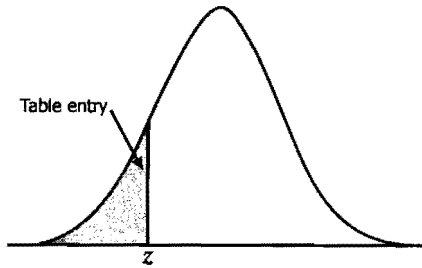
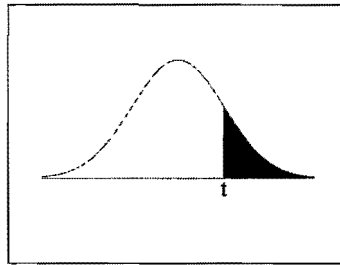


Table entry for z is the area under the standard normal curve to the left of z .

z	.00	.01	.02	.03	.04	.05	.06	.07	.08	.09
-3.4	.0003	.0003	.0003	.0003	.0003	.0003	.0003	.0003	.0003	.0002
-3.3	.0005	.0005	.0005	.0004	.0004	.0004	.0004	.0004	.0004	.0003
-3.2	.0007	.0007	.0006	.0006	.0006	.0006	.0006	.0005	.0005	.0005
-3.1	.0010	.0009	.0009	.0009	.0008	.0008	.0008	.0008	.0007	.0007
-3.0	.0013	.0013	.0013	.0012	.0012	.0011	.0011	.0011	.0010	.0010
-2.9	.0019	.0018	.0018	.0017	.0016	.0016	.0015	.0015	.0014	.0014
-2.8	.0026	.0025	.0024	.0023	.0023	.0022	.0021	.0021	.0020	.0019
-2.7	.0035	.0034	.0033	.0032	.0031	.0030	.0029	.0028	.0027	.0026
-2.6	.0047	.0045	.0044	.0043	.0041	.0040	.0039	.0038	.0037	.0036
-2.5	.0062	.0060	.0059	.0057	.0055	.0054	.0052	.0051	.0049	.0048
-2.4	.0082	.0080	.0078	.0075	.0073	.0071	.0069	.0068	.0066	.0064
-2.3	.0107	.0104	.0102	.0099	.0096	.0094	.0091	.0089	.0087	.0084
-2.2	.0139	.0136	.0132	.0129	.0125	.0122	.0119	.0116	.0113	.0110
-2.1	.0179	.0174	.0170	.0166	.0162	.0158	.0154	.0150	.0146	.0143
-2.0	.0228	.0222	.0217	.0212	.0207	.0202	.0197	.0192	.0188	.0183
-1.9	.0287	.0281	.0274	.0268	.0262	.0256	.0250	.0244	.0239	.0233
-1.8	.0359	.0351	.0344	.0336	.0329	.0322	.0314	.0307	.0301	.0294
-1.7	.0446	.0436	.0427	.0418	.0409	.0401	.0392	.0384	.0375	.0367
-1.6	.0548	.0537	.0526	.0516	.0505	.0495	.0485	.0475	.0465	.0455
-1.5	.0668	.0655	.0643	.0630	.0618	.0606	.0594	.0582	.0571	.0559
-1.4	.0808	.0793	.0778	.0764	.0749	.0735	.0721	.0708	.0694	.0681
-1.3	.0968	.0951	.0934	.0918	.0901	.0885	.0869	.0853	.0838	.0823
-1.2	.1151	.1131	.1112	.1093	.1075	.1056	.1038	.1020	.1003	.0985
-1.1	.1357	.1335	.1314	.1292	.1271	.1251	.1230	.1210	.1190	.1170
-1.0	.1587	.1562	.1539	.1515	.1492	.1469	.1446	.1423	.1401	.1379
-0.9	.1841	.1814	.1788	.1762	.1736	.1711	.1685	.1660	.1635	.1611
-0.8	.2119	.2090	.2061	.2033	.2005	.1977	.1949	.1922	.1894	.1867
-0.7	.2420	.2389	.2358	.2327	.2296	.2266	.2236	.2206	.2177	.2148
-0.6	.2743	.2709	.2676	.2643	.2611	.2578	.2546	.2514	.2483	.2451
-0.5	.3085	.3050	.3015	.2981	.2946	.2912	.2877	.2843	.2810	.2776
-0.4	.3446	.3409	.3372	.3336	.3300	.3264	.3228	.3192	.3156	.3121
-0.3	.3821	.3783	.3745	.3707	.3669	.3632	.3594	.3557	.3520	.3483
-0.2	.4207	.4168	.4129	.4090	.4052	.4013	.3974	.3936	.3897	.3859
-0.1	.4602	.4562	.4522	.4483	.4443	.4404	.4364	.4325	.4286	.4247
-0.0	.5000	.4960	.4920	.4880	.4840	.4801	.4761	.4721	.4681	.4641

t-Distribution Table



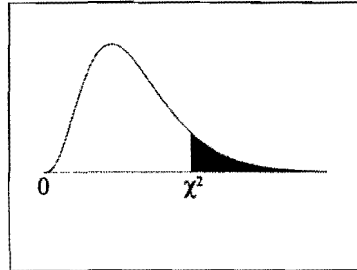
The shaded area is equal to α for $t = t_\alpha$.

<i>df</i>	$t_{.100}$	$t_{.050}$	$t_{.025}$	$t_{.010}$	$t_{.005}$
1	3.078	6.314	12.706	31.821	63.657
2	1.886	2.920	4.303	6.965	9.925
3	1.638	2.353	3.182	4.541	5.841
4	1.533	2.132	2.776	3.747	4.604
5	1.476	2.015	2.571	3.365	4.032
6	1.440	1.943	2.447	3.143	3.707
7	1.415	1.895	2.365	2.998	3.499
8	1.397	1.860	2.306	2.896	3.355
9	1.383	1.833	2.262	2.821	3.250
10	1.372	1.812	2.228	2.764	3.169
11	1.363	1.796	2.201	2.718	3.106
12	1.356	1.782	2.179	2.681	3.055
13	1.350	1.771	2.160	2.650	3.012
14	1.345	1.761	2.145	2.624	2.977
15	1.341	1.753	2.131	2.602	2.947
16	1.337	1.746	2.120	2.583	2.921
17	1.333	1.740	2.110	2.567	2.898
18	1.330	1.734	2.101	2.552	2.878
19	1.328	1.729	2.093	2.539	2.861
20	1.325	1.725	2.086	2.528	2.845
21	1.323	1.721	2.080	2.518	2.831
22	1.321	1.717	2.074	2.508	2.819
23	1.319	1.714	2.069	2.500	2.807
24	1.318	1.711	2.064	2.492	2.797
25	1.316	1.708	2.060	2.485	2.787
26	1.315	1.706	2.056	2.479	2.779
27	1.314	1.703	2.052	2.473	2.771
28	1.313	1.701	2.048	2.467	2.763
29	1.311	1.699	2.045	2.462	2.756
30	1.310	1.697	2.042	2.457	2.750
32	1.309	1.694	2.037	2.449	2.738
34	1.307	1.691	2.032	2.441	2.728
36	1.306	1.688	2.028	2.434	2.719
38	1.304	1.686	2.024	2.429	2.712
∞	1.282	1.645	1.960	2.326	2.576

TABLE A.2
t Distribution: Critical Values of t

Degrees of freedom	Two-tailed test: One-tailed test:	Significance level					
		10% 5%	5% 2.5%	2% 1%	1% 0.5%	0.2% 0.1%	0.1% 0.05%
1		6.314	12.706	31.821	63.657	318.309	636.619
2		2.920	4.303	6.965	9.925	22.327	31.599
3		2.353	3.182	4.541	5.841	10.215	12.924
4		2.132	2.776	3.747	4.604	7.173	8.610
5		2.015	2.571	3.365	4.032	5.893	6.869
6		1.943	2.447	3.143	3.707	5.208	5.959
7		1.894	2.365	2.998	3.499	4.785	5.408
8		1.860	2.306	2.896	3.355	4.501	5.041
9		1.833	2.262	2.821	3.250	4.297	4.781
10		1.812	2.228	2.764	3.169	4.144	4.587
11		1.796	2.201	2.718	3.106	4.025	4.437
12		1.782	2.179	2.681	3.055	3.930	4.318
13		1.771	2.160	2.650	3.012	3.852	4.221
14		1.761	2.145	2.624	2.977	3.787	4.140
15		1.753	2.131	2.602	2.947	3.733	4.073
16		1.746	2.120	2.583	2.921	3.686	4.015
17		1.740	2.110	2.567	2.898	3.646	3.965
18		1.734	2.101	2.552	2.878	3.610	3.922
19		1.729	2.093	2.539	2.861	3.579	3.883
20		1.725	2.086	2.528	2.845	3.552	3.850
21		1.721	2.080	2.518	2.831	3.527	3.819
22		1.717	2.074	2.508	2.819	3.505	3.792
23		1.714	2.069	2.500	2.807	3.485	3.768
24		1.711	2.064	2.492	2.797	3.467	3.745
25		1.708	2.060	2.485	2.787	3.450	3.725
26		1.706	2.056	2.479	2.779	3.435	3.707
27		1.703	2.052	2.473	2.771	3.421	3.690
28		1.701	2.048	2.467	2.763	3.408	3.674
29		1.699	2.045	2.462	2.756	3.396	3.659
30		1.697	2.042	2.457	2.750	3.385	3.646
32		1.694	2.037	2.449	2.738	3.365	3.622
34		1.691	2.032	2.441	2.728	3.348	3.601
36		1.688	2.028	2.434	2.719	3.333	3.582
38		1.686	2.024	2.429	2.712	3.319	3.566
40		1.684	2.021	2.423	2.704	3.307	3.551
42		1.682	2.018	2.418	2.698	3.296	3.538
44		1.680	2.015	2.414	2.692	3.286	3.526
46		1.679	2.013	2.410	2.687	3.277	3.515
48		1.677	2.011	2.407	2.682	3.269	3.505
50		1.676	2.009	2.403	2.678	3.261	3.496
60		1.671	2.000	2.390	2.660	3.232	3.460
70		1.667	1.994	2.381	2.648	3.211	3.435
80		1.664	1.990	2.374	2.639	3.195	3.416
90		1.662	1.987	2.368	2.632	3.183	3.402
100		1.660	1.984	2.364	2.626	3.174	3.390
120		1.658	1.980	2.358	2.617	3.160	3.373
150		1.655	1.976	2.351	2.609	3.145	3.357
200		1.653	1.972	2.345	2.601	3.131	3.340
300		1.650	1.968	2.339	2.592	3.118	3.323
400		1.649	1.966	2.336	2.588	3.111	3.315
500		1.648	1.965	2.334	2.586	3.107	3.310
600		1.647	1.964	2.333	2.584	3.104	3.307
∞		1.645	1.960	2.326	2.576	3.090	3.291

Chi-Square Distribution Table



The shaded area is equal to α for $\chi^2 = \chi^2_{\alpha}$.

<i>df</i>	$\chi^2_{.995}$	$\chi^2_{.990}$	$\chi^2_{.975}$	$\chi^2_{.950}$	$\chi^2_{.900}$	$\chi^2_{.100}$	$\chi^2_{.050}$	$\chi^2_{.025}$	$\chi^2_{.010}$	$\chi^2_{.005}$
1	0.000	0.000	0.001	0.004	0.016	2.706	3.841	5.024	6.635	7.879
2	0.010	0.020	0.051	0.103	0.211	4.605	5.991	7.378	9.210	10.597
3	0.072	0.115	0.216	0.352	0.584	6.251	7.815	9.348	11.345	12.838
4	0.207	0.297	0.484	0.711	1.064	7.779	9.488	11.143	13.277	14.860
5	0.412	0.554	0.831	1.145	1.610	9.236	11.070	12.833	15.086	16.750
6	0.676	0.872	1.237	1.635	2.204	10.645	12.592	14.449	16.812	18.548
7	0.989	1.239	1.690	2.167	2.833	12.017	14.067	16.013	18.475	20.278
8	1.344	1.646	2.180	2.733	3.490	13.362	15.507	17.535	20.090	21.955
9	1.735	2.088	2.700	3.325	4.168	14.684	16.919	19.023	21.666	23.589
10	2.156	2.558	3.247	3.940	4.865	15.987	18.307	20.483	23.209	25.188
11	2.603	3.053	3.816	4.575	5.578	17.275	19.675	21.920	24.725	26.757
12	3.074	3.571	4.404	5.226	6.304	18.549	21.026	23.337	26.217	28.300
13	3.565	4.107	5.009	5.892	7.042	19.812	22.362	24.736	27.688	29.819
14	4.075	4.660	5.629	6.571	7.790	21.064	23.685	26.119	29.141	31.319
15	4.601	5.229	6.262	7.261	8.547	22.307	24.996	27.488	30.578	32.801
16	5.142	5.812	6.908	7.962	9.312	23.542	26.296	28.845	32.000	34.267
17	5.697	6.408	7.564	8.672	10.085	24.769	27.587	30.191	33.409	35.718
18	6.265	7.015	8.231	9.390	10.865	25.989	28.869	31.526	34.805	37.156
19	6.844	7.633	8.907	10.117	11.651	27.204	30.144	32.852	36.191	38.582
20	7.434	8.260	9.591	10.851	12.443	28.412	31.410	34.170	37.566	39.997
21	8.034	8.897	10.283	11.591	13.240	29.615	32.671	35.479	38.932	41.401
22	8.643	9.542	10.982	12.338	14.041	30.813	33.924	36.781	40.289	42.796
23	9.260	10.196	11.689	13.091	14.848	32.007	35.172	38.076	41.638	44.181
24	9.886	10.856	12.401	13.848	15.659	33.196	36.415	39.364	42.980	45.559
25	10.520	11.524	13.120	14.611	16.473	34.382	37.652	40.646	44.314	46.928
26	11.160	12.198	13.844	15.379	17.292	35.563	38.885	41.923	45.642	48.290
27	11.808	12.879	14.573	16.151	18.114	36.741	40.113	43.195	46.963	49.645
28	12.461	13.565	15.308	16.928	18.939	37.916	41.337	44.461	48.278	50.993
29	13.121	14.256	16.047	17.708	19.768	39.087	42.557	45.722	49.588	52.336
30	13.787	14.953	16.791	18.493	20.599	40.256	43.773	46.979	50.892	53.672
40	20.707	22.164	24.433	26.509	29.051	51.805	55.758	59.342	63.691	66.766
50	27.991	29.707	32.357	34.764	37.689	63.167	67.505	71.420	76.154	79.490
60	35.534	37.485	40.482	43.188	46.459	74.397	79.082	83.298	88.379	91.952
70	43.275	45.442	48.758	51.739	55.329	85.527	90.531	95.023	100.425	104.215
80	51.172	53.540	57.153	60.391	64.278	96.578	101.879	106.629	112.329	116.321
90	59.196	61.754	65.647	69.126	73.291	107.565	113.145	118.136	124.116	128.299
100	67.328	70.065	74.222	77.929	82.358	118.498	124.342	129.561	135.807	140.169

TABLE A.3

F Distribution: Critical Values of F (5% significance level)

v_1	1	2	3	4	5	6	7	8	9	10	12	14	16	18	20
1	161.45	199.50	215.71	224.58	230.16	233.99	236.77	238.88	240.54	241.88	243.91	245.36	246.46	247.32	248.01
2	18.51	19.00	19.16	19.25	19.30	19.33	19.35	19.37	19.38	19.40	19.41	19.42	19.43	19.44	19.45
3	10.13	9.55	9.28	9.12	9.01	8.94	8.89	8.85	8.81	8.79	8.74	8.71	8.69	8.67	8.66
4	7.71	6.94	6.59	6.39	6.26	6.16	6.09	6.04	6.00	5.96	5.91	5.87	5.84	5.82	5.80
5	6.61	5.79	5.41	5.19	5.05	4.95	4.88	4.82	4.77	4.74	4.68	4.64	4.60	4.58	4.56
6	5.99	5.14	4.76	4.53	4.39	4.28	4.21	4.15	4.10	4.06	4.00	3.96	3.92	3.90	3.87
7	5.59	4.74	4.35	4.12	3.97	3.87	3.79	3.73	3.68	3.64	3.57	3.53	3.49	3.47	3.44
8	5.32	4.46	4.07	3.84	3.69	3.58	3.50	3.44	3.39	3.35	3.28	3.24	3.20	3.17	3.15
9	5.12	4.26	3.86	3.63	3.48	3.37	3.29	3.23	3.18	3.14	3.07	3.03	2.99	2.96	2.94
10	4.96	4.10	3.71	3.48	3.33	3.22	3.14	3.07	3.02	2.98	2.91	2.86	2.83	2.80	2.77
11	4.84	3.98	3.59	3.36	3.20	3.09	3.01	2.95	2.90	2.85	2.79	2.74	2.70	2.67	2.65
12	4.75	3.89	3.49	3.26	3.11	3.00	2.91	2.85	2.80	2.75	2.69	2.64	2.60	2.57	2.54
13	4.67	3.81	3.41	3.18	3.03	2.92	2.83	2.77	2.71	2.67	2.60	2.55	2.51	2.48	2.46
14	4.60	3.74	3.34	3.11	2.96	2.85	2.76	2.70	2.65	2.60	2.53	2.48	2.44	2.41	2.39
15	4.54	3.68	3.29	3.06	2.90	2.79	2.71	2.64	2.59	2.54	2.48	2.42	2.38	2.35	2.33
16	4.49	3.63	3.24	3.01	2.85	2.74	2.66	2.59	2.54	2.49	2.42	2.37	2.33	2.30	2.28
17	4.45	3.59	3.20	2.96	2.81	2.70	2.61	2.55	2.49	2.45	2.38	2.33	2.29	2.26	2.23
18	4.41	3.55	3.16	2.93	2.77	2.66	2.58	2.51	2.46	2.41	2.34	2.29	2.25	2.22	2.19
19	4.38	3.52	3.13	2.90	2.74	2.63	2.54	2.48	2.42	2.38	2.31	2.26	2.21	2.18	2.16
20	4.35	3.49	3.10	2.87	2.71	2.60	2.51	2.45	2.39	2.35	2.28	2.22	2.18	2.15	2.12
21	4.32	3.47	3.07	2.84	2.68	2.57	2.49	2.42	2.37	2.32	2.25	2.20	2.16	2.12	2.10
22	4.30	3.44	3.05	2.82	2.66	2.55	2.46	2.40	2.34	2.30	2.23	2.17	2.13	2.10	2.07
23	4.28	3.42	3.03	2.80	2.64	2.53	2.44	2.37	2.32	2.27	2.20	2.15	2.11	2.08	2.05
24	4.26	3.40	3.01	2.78	2.62	2.51	2.42	2.36	2.30	2.25	2.18	2.13	2.09	2.05	2.03
25	4.24	3.39	2.99	2.76	2.60	2.49	2.40	2.34	2.28	2.24	2.16	2.11	2.07	2.04	2.01
26	4.22	3.37	2.98	2.74	2.59	2.47	2.39	2.32	2.27	2.22	2.15	2.09	2.05	2.02	1.99
27	4.21	3.35	2.96	2.73	2.57	2.46	2.37	2.31	2.25	2.20	2.13	2.08	2.04	2.00	1.97
28	4.20	3.34	2.95	2.71	2.56	2.45	2.36	2.29	2.24	2.19	2.12	2.06	2.02	1.99	1.96
29	4.18	3.33	2.93	2.70	2.55	2.43	2.35	2.28	2.22	2.18	2.10	2.05	2.01	1.97	1.94
30	4.17	3.32	2.92	2.69	2.53	2.42	2.33	2.27	2.21	2.16	2.09	2.04	1.99	1.96	1.93
35	4.12	3.27	2.87	2.64	2.49	2.37	2.29	2.22	2.16	2.11	2.04	1.99	1.94	1.91	1.88
40	4.08	3.23	2.84	2.61	2.45	2.34	2.25	2.18	2.12	2.08	2.00	1.95	1.90	1.87	1.84
50	4.03	3.18	2.79	2.56	2.40	2.29	2.20	2.13	2.07	2.03	1.95	1.89	1.85	1.81	1.78
60	4.00	3.15	2.76	2.53	2.37	2.25	2.17	2.10	2.04	1.99	1.92	1.86	1.82	1.78	1.75
70	3.98	3.13	2.74	2.50	2.35	2.23	2.14	2.07	2.02	1.97	1.89	1.84	1.79	1.75	1.72
80	3.96	3.11	2.72	2.49	2.33	2.21	2.13	2.06	2.00	1.95	1.88	1.82	1.77	1.73	1.70
90	3.95	3.10	2.71	2.47	2.32	2.20	2.11	2.04	1.99	1.94	1.86	1.80	1.76	1.72	1.69
100	3.94	3.09	2.70	2.46	2.31	2.19	2.10	2.03	1.97	1.93	1.85	1.79	1.75	1.71	1.68
120	3.92	3.07	2.68	2.45	2.29	2.18	2.09	2.02	1.96	1.91	1.83	1.78	1.73	1.69	1.66
150	3.90	3.06	2.66	2.43	2.27	2.16	2.07	2.00	1.94	1.89	1.82	1.76	1.71	1.67	1.64
200	3.89	3.04	2.65	2.42	2.26	2.14	2.06	1.98	1.93	1.88	1.80	1.74	1.69	1.66	1.62
250	3.88	3.03	2.64	2.41	2.25	2.13	2.05	1.98	1.92	1.87	1.79	1.73	1.68	1.65	1.61
300	3.87	3.03	2.63	2.40	2.24	2.13	2.04	1.97	1.91	1.86	1.78	1.72	1.68	1.64	1.61
400	3.86	3.02	2.63	2.39	2.24	2.12	2.03	1.96	1.90	1.85	1.78	1.72	1.67	1.63	1.60
500	3.86	3.01	2.62	2.39	2.23	2.12	2.03	1.96	1.90	1.85	1.77	1.71	1.66	1.62	1.59
600	3.86	3.01	2.62	2.39	2.23	2.11	2.02	1.95	1.90	1.85	1.77	1.71	1.66	1.62	1.59
750	3.85	3.01	2.62	2.38	2.23	2.11	2.02	1.95	1.89	1.84	1.77	1.70	1.66	1.62	1.58
1000	3.85	3.00	2.61	2.38	2.22	2.11	2.02	1.95	1.89	1.84	1.76	1.70	1.65	1.61	1.58

TABLE A.3 (continued)

F Distribution: Critical Values of F (5% significance level)

ν_1	25	30	35	40	50	60	75	100	150	200
ν_2										
1	249.26	250.10	250.69	251.14	251.77	252.20	252.62	253.04	253.46	253.68
2	19.46	19.46	19.47	19.47	19.48	19.48	19.48	19.49	19.49	19.49
3	8.63	8.62	8.60	8.59	8.58	8.57	8.56	8.55	8.54	8.54
4	5.77	5.75	5.73	5.72	5.70	5.69	5.68	5.66	5.65	5.65
5	4.52	4.50	4.48	4.46	4.44	4.43	4.42	4.41	4.39	4.39
6	3.83	3.81	3.79	3.77	3.75	3.74	3.73	3.71	3.70	3.69
7	3.40	3.38	3.36	3.34	3.32	3.30	3.29	3.27	3.26	3.25
8	3.11	3.08	3.06	3.04	3.02	3.01	2.99	2.97	2.96	2.95
9	2.89	2.86	2.84	2.83	2.80	2.79	2.77	2.76	2.74	2.73
10	2.73	2.70	2.68	2.66	2.64	2.62	2.60	2.59	2.57	2.56
11	2.60	2.57	2.55	2.53	2.51	2.49	2.47	2.46	2.44	2.43
12	2.50	2.47	2.44	2.43	2.40	2.38	2.37	2.35	2.33	2.32
13	2.41	2.38	2.36	2.34	2.31	2.30	2.28	2.26	2.24	2.23
14	2.34	2.31	2.28	2.27	2.24	2.22	2.21	2.19	2.17	2.16
15	2.28	2.25	2.22	2.20	2.18	2.16	2.14	2.12	2.10	2.10
16	2.23	2.19	2.17	2.15	2.12	2.11	2.09	2.07	2.05	2.04
17	2.18	2.15	2.12	2.10	2.08	2.06	2.04	2.02	2.00	1.99
18	2.14	2.11	2.08	2.06	2.04	2.02	2.00	1.98	1.96	1.95
19	2.11	2.07	2.05	2.03	2.00	1.98	1.96	1.94	1.92	1.91
20	2.07	2.04	2.01	1.99	1.97	1.95	1.93	1.91	1.89	1.88
21	2.05	2.01	1.98	1.96	1.94	1.92	1.90	1.88	1.86	1.84
22	2.02	1.98	1.96	1.94	1.91	1.89	1.87	1.85	1.83	1.82
23	2.00	1.96	1.93	1.91	1.88	1.86	1.84	1.82	1.80	1.79
24	1.97	1.94	1.91	1.89	1.86	1.84	1.82	1.80	1.78	1.77
25	1.96	1.92	1.89	1.87	1.84	1.82	1.80	1.78	1.76	1.75
26	1.94	1.90	1.87	1.85	1.82	1.80	1.78	1.76	1.74	1.73
27	1.92	1.88	1.86	1.84	1.81	1.79	1.76	1.74	1.72	1.71
28	1.91	1.87	1.84	1.82	1.79	1.77	1.75	1.73	1.70	1.69
29	1.89	1.85	1.83	1.81	1.77	1.75	1.73	1.71	1.69	1.67
30	1.88	1.84	1.81	1.79	1.76	1.74	1.72	1.70	1.67	1.66
35	1.82	1.79	1.76	1.74	1.70	1.68	1.66	1.63	1.61	1.60
40	1.78	1.74	1.72	1.69	1.66	1.64	1.61	1.59	1.56	1.55
50	1.73	1.69	1.66	1.63	1.60	1.58	1.55	1.52	1.50	1.48
60	1.69	1.65	1.62	1.59	1.56	1.53	1.51	1.48	1.45	1.44
70	1.66	1.62	1.59	1.57	1.53	1.50	1.48	1.45	1.42	1.40
80	1.64	1.60	1.57	1.54	1.51	1.48	1.45	1.43	1.39	1.38
90	1.63	1.59	1.55	1.53	1.49	1.46	1.44	1.41	1.38	1.36
100	1.62	1.57	1.54	1.52	1.48	1.45	1.42	1.39	1.36	1.34
120	1.60	1.55	1.52	1.50	1.46	1.43	1.40	1.37	1.33	1.32
150	1.58	1.54	1.50	1.48	1.44	1.41	1.38	1.34	1.31	1.29
200	1.56	1.52	1.48	1.46	1.41	1.39	1.35	1.32	1.28	1.26
250	1.55	1.50	1.47	1.44	1.40	1.37	1.34	1.31	1.27	1.25
300	1.54	1.50	1.46	1.43	1.39	1.36	1.33	1.30	1.26	1.23
400	1.53	1.49	1.45	1.42	1.38	1.35	1.32	1.28	1.24	1.22
500	1.53	1.48	1.45	1.42	1.38	1.35	1.31	1.28	1.23	1.21
600	1.52	1.48	1.44	1.41	1.37	1.34	1.31	1.27	1.23	1.20
750	1.52	1.47	1.44	1.41	1.37	1.34	1.30	1.26	1.22	1.20
1000	1.52	1.47	1.43	1.41	1.36	1.33	1.30	1.26	1.22	1.19

TABLE A.3 (continued)

F Distribution: Critical Values of F (1% significance level)

v_1	1	2	3	4	5	6	7	8	9	10	12	14	16	18	20
v_2															
1	4052.18	4999.50	5403.35	5624.58	5763.65	5858.99	5928.36	5981.07	6022.47	6055.85	6106.32	6142.67	6170.10	6191.53	6208.73
2	98.50	99.00	99.17	99.25	99.30	99.33	99.36	99.37	99.39	99.40	99.42	99.43	99.44	99.44	99.45
3	34.12	30.82	29.46	28.71	28.24	27.91	27.67	27.49	27.35	27.23	27.05	26.92	26.83	26.75	26.69
4	21.20	18.00	16.69	15.98	15.52	15.21	14.98	14.80	14.66	14.55	14.37	14.25	14.15	14.08	14.02
5	16.26	13.27	12.06	11.39	10.97	10.67	10.46	10.29	10.16	10.05	9.89	9.77	9.68	9.61	9.55
6	13.75	10.92	9.78	9.15	8.75	8.47	8.26	8.10	7.98	7.87	7.72	7.60	7.52	7.45	7.40
7	12.25	9.55	8.45	7.85	7.46	7.19	6.99	6.84	6.72	6.62	6.47	6.36	6.28	6.21	6.16
8	11.26	8.65	7.59	7.01	6.63	6.37	6.18	6.03	5.91	5.81	5.67	5.56	5.48	5.41	5.36
9	10.56	8.02	6.99	6.42	6.06	5.80	5.61	5.47	5.35	5.26	5.11	5.01	4.92	4.86	4.81
10	10.04	7.56	6.55	5.99	5.64	5.39	5.20	5.06	4.94	4.85	4.71	4.60	4.52	4.46	4.41
11	9.65	7.21	6.22	5.67	5.32	5.07	4.89	4.74	4.63	4.54	4.40	4.29	4.21	4.15	4.10
12	9.33	6.93	5.95	5.41	5.06	4.82	4.64	4.50	4.39	4.30	4.16	4.05	3.97	3.91	3.86
13	9.07	6.70	5.74	5.21	4.86	4.62	4.44	4.30	4.19	4.10	3.96	3.86	3.78	3.72	3.66
14	8.86	6.51	5.56	5.04	4.69	4.46	4.28	4.14	4.03	3.94	3.80	3.70	3.62	3.56	3.51
15	8.68	6.36	5.42	4.89	4.56	4.32	4.14	4.00	3.89	3.80	3.67	3.56	3.49	3.42	3.37
16	8.53	6.23	5.29	4.77	4.44	4.20	4.03	3.89	3.78	3.69	3.55	3.45	3.37	3.31	3.26
17	8.40	6.11	5.18	4.67	4.34	4.10	3.93	3.79	3.68	3.59	3.46	3.35	3.27	3.21	3.16
18	8.29	6.01	5.09	4.58	4.25	4.01	3.84	3.71	3.60	3.51	3.37	3.27	3.19	3.13	3.08
19	8.18	5.93	5.01	4.50	4.17	3.94	3.77	3.63	3.52	3.43	3.30	3.19	3.12	3.05	3.00
20	8.10	5.85	4.94	4.43	4.10	3.87	3.70	3.56	3.46	3.37	3.23	3.13	3.05	2.99	2.94
21	8.02	5.78	4.87	4.37	4.04	3.81	3.64	3.51	3.40	3.31	3.17	3.07	2.99	2.93	2.88
22	7.95	5.72	4.82	4.31	3.99	3.76	3.59	3.45	3.35	3.26	3.12	3.02	2.94	2.88	2.83
23	7.88	5.66	4.76	4.26	3.94	3.71	3.54	3.41	3.30	3.21	3.07	2.97	2.89	2.83	2.78
24	7.82	5.61	4.72	4.22	3.90	3.67	3.50	3.36	3.26	3.17	3.03	2.93	2.85	2.79	2.74
25	7.77	5.57	4.68	4.18	3.85	3.63	3.46	3.32	3.22	3.13	2.99	2.89	2.81	2.75	2.70
26	7.72	5.53	4.64	4.14	3.82	3.59	3.42	3.29	3.18	3.09	2.96	2.86	2.78	2.72	2.66
27	7.68	5.49	4.60	4.11	3.78	3.56	3.39	3.26	3.15	3.06	2.93	2.82	2.75	2.68	2.63
28	7.64	5.45	4.57	4.07	3.75	3.53	3.36	3.23	3.12	3.03	2.90	2.79	2.72	2.65	2.60
29	7.60	5.42	4.54	4.04	3.73	3.50	3.33	3.20	3.09	3.00	2.87	2.77	2.69	2.63	2.57
30	7.56	5.39	4.51	4.02	3.70	3.47	3.30	3.17	3.07	2.98	2.84	2.74	2.66	2.60	2.55
35	7.42	5.27	4.40	3.91	3.59	3.37	3.20	3.07	2.96	2.88	2.74	2.64	2.56	2.50	2.44
40	7.31	5.18	4.31	3.83	3.51	3.29	3.12	2.99	2.89	2.80	2.66	2.56	2.48	2.42	2.37
50	7.17	5.06	4.20	3.72	3.41	3.19	3.02	2.89	2.78	2.70	2.56	2.46	2.38	2.32	2.27
60	7.08	4.98	4.13	3.65	3.34	3.12	2.95	2.82	2.72	2.63	2.50	2.39	2.31	2.25	2.20
70	7.01	4.92	4.07	3.60	3.29	3.07	2.91	2.78	2.67	2.59	2.45	2.35	2.27	2.20	2.15
80	6.96	4.88	4.04	3.56	3.26	3.04	2.87	2.74	2.64	2.55	2.42	2.31	2.23	2.17	2.12
90	6.93	4.85	4.01	3.53	3.23	3.01	2.84	2.72	2.61	2.52	2.39	2.29	2.21	2.14	2.09
100	6.90	4.82	3.98	3.51	3.21	2.99	2.82	2.69	2.59	2.50	2.37	2.27	2.19	2.12	2.07
120	6.85	4.79	3.95	3.48	3.17	2.96	2.79	2.66	2.56	2.47	2.34	2.23	2.15	2.09	2.03
150	6.81	4.75	3.91	3.45	3.14	2.92	2.76	2.63	2.53	2.44	2.31	2.20	2.12	2.06	2.00
200	6.76	4.71	3.88	3.41	3.11	2.89	2.73	2.60	2.50	2.41	2.27	2.17	2.09	2.03	1.97
250	6.74	4.69	3.86	3.40	3.09	2.87	2.71	2.58	2.48	2.39	2.26	2.15	2.07	2.01	1.95
300	6.72	4.68	3.85	3.38	3.08	2.86	2.70	2.57	2.47	2.38	2.24	2.14	2.06	1.99	1.94
400	6.70	4.66	3.83	3.37	3.06	2.85	2.68	2.56	2.45	2.37	2.23	2.13	2.05	1.98	1.92
500	6.69	4.65	3.82	3.36	3.05	2.84	2.68	2.55	2.44	2.36	2.22	2.12	2.04	1.97	1.92
600	6.68	4.64	3.81	3.35	3.05	2.83	2.67	2.54	2.44	2.35	2.21	2.11	2.03	1.96	1.91
750	6.67	4.63	3.81	3.34	3.04	2.83	2.66	2.53	2.43	2.34	2.21	2.11	2.02	1.96	1.90
1000	6.66	4.63	3.80	3.34	3.04	2.82	2.66	2.53	2.43	2.34	2.20	2.10	2.02	1.95	1.90

TABLE A.3 (continued)

F Distribution: Critical Values of F (1% significance level)

v_1	25	30	35	40	50	60	75	100	150	200
v_2										
1	6239.83	6260.65	6275.57	6286.78	6302.52	6313.03	6323.56	6334.11	6344.68	6349.97
2	99.46	99.47	99.47	99.47	99.48	99.48	99.49	99.49	99.49	99.49
3	26.58	26.50	26.45	26.41	26.35	26.32	26.28	26.24	26.20	26.18
4	13.91	13.84	13.79	13.75	13.69	13.65	13.61	13.58	13.54	13.52
5	9.45	9.38	9.33	9.29	9.24	9.20	9.17	9.13	9.09	9.08
6	7.30	7.23	7.18	7.14	7.09	7.06	7.02	6.99	6.95	6.93
7	6.06	5.99	5.94	5.91	5.86	5.82	5.79	5.75	5.72	5.70
8	5.26	5.20	5.15	5.12	5.07	5.03	5.00	4.96	4.93	4.91
9	4.71	4.65	4.60	4.57	4.52	4.48	4.45	4.41	4.38	4.36
10	4.31	4.25	4.20	4.17	4.12	4.08	4.05	4.01	3.98	3.96
11	4.01	3.94	3.89	3.86	3.81	3.78	3.74	3.71	3.67	3.66
12	3.76	3.70	3.65	3.62	3.57	3.54	3.50	3.47	3.43	3.41
13	3.57	3.51	3.46	3.43	3.38	3.34	3.31	3.27	3.24	3.22
14	3.41	3.35	3.30	3.27	3.22	3.18	3.15	3.11	3.08	3.06
15	3.28	3.21	3.17	3.13	3.08	3.05	3.01	2.98	2.94	2.92
16	3.16	3.10	3.05	3.02	2.97	2.93	2.90	2.86	2.83	2.81
17	3.07	3.00	2.96	2.92	2.87	2.83	2.80	2.76	2.73	2.71
18	2.98	2.92	2.87	2.84	2.78	2.75	2.71	2.68	2.64	2.62
19	2.91	2.84	2.80	2.76	2.71	2.67	2.64	2.60	2.57	2.55
20	2.84	2.78	2.73	2.69	2.64	2.61	2.57	2.54	2.50	2.48
21	2.79	2.72	2.67	2.64	2.58	2.55	2.51	2.48	2.44	2.42
22	2.73	2.67	2.62	2.58	2.53	2.50	2.46	2.42	2.38	2.36
23	2.69	2.62	2.57	2.54	2.48	2.45	2.41	2.37	2.34	2.32
24	2.64	2.58	2.53	2.49	2.44	2.40	2.37	2.33	2.29	2.27
25	2.60	2.54	2.49	2.45	2.40	2.36	2.33	2.29	2.25	2.23
26	2.57	2.50	2.45	2.42	2.36	2.33	2.29	2.25	2.21	2.19
27	2.54	2.47	2.42	2.38	2.33	2.29	2.26	2.22	2.18	2.16
28	2.51	2.44	2.39	2.35	2.30	2.26	2.23	2.19	2.15	2.13
29	2.48	2.41	2.36	2.33	2.27	2.23	2.20	2.16	2.12	2.10
30	2.45	2.39	2.34	2.30	2.25	2.21	2.17	2.13	2.09	2.07
35	2.35	2.28	2.23	2.19	2.14	2.10	2.06	2.02	1.98	1.96
40	2.27	2.20	2.15	2.11	2.06	2.02	1.98	1.94	1.90	1.87
50	2.17	2.10	2.05	2.01	1.95	1.91	1.87	1.82	1.78	1.76
60	2.10	2.03	1.98	1.94	1.88	1.84	1.79	1.75	1.70	1.68
70	2.05	1.98	1.93	1.89	1.83	1.78	1.74	1.70	1.65	1.62
80	2.01	1.94	1.89	1.85	1.79	1.75	1.70	1.65	1.61	1.58
90	1.99	1.92	1.86	1.82	1.76	1.72	1.67	1.62	1.57	1.55
100	1.97	1.89	1.84	1.80	1.74	1.69	1.65	1.60	1.55	1.52
120	1.93	1.86	1.81	1.76	1.70	1.66	1.61	1.56	1.51	1.48
150	1.90	1.83	1.77	1.73	1.66	1.62	1.57	1.52	1.46	1.43
200	1.87	1.79	1.74	1.69	1.63	1.58	1.53	1.48	1.42	1.39
250	1.85	1.77	1.72	1.67	1.61	1.56	1.51	1.46	1.40	1.36
300	1.84	1.76	1.70	1.66	1.59	1.55	1.50	1.44	1.38	1.35
400	1.82	1.75	1.69	1.64	1.58	1.53	1.48	1.42	1.36	1.32
500	1.81	1.74	1.68	1.63	1.57	1.52	1.47	1.41	1.34	1.31
600	1.80	1.73	1.67	1.63	1.56	1.51	1.46	1.40	1.34	1.30
750	1.80	1.72	1.66	1.62	1.55	1.50	1.45	1.39	1.33	1.29
1000	1.79	1.72	1.66	1.61	1.54	1.50	1.44	1.38	1.32	1.28